

2nd Grade Homework Packet
April 29 - May 2, 2013

Monday

Study this week's spelling list for Friday's test. Complete the "Spelling ABC" worksheet and the vowel sound page.

Read!

Tuesday

Study your spelling words. Complete the Math Problem Solving pages 99, 100, 101 and 102. Have an adult check your homework for errors, and sign after you correct it. Practice multiplication facts.

Read!

Wednesday

Study your spelling words. Complete the Math Problem Solving pages 101 and 104. Complete the "Main Idea & Details" paper. Have an adult make sure that you understood, then sign all work. Practice money skills with an adult! Make different amounts with coins. "Buy" a few things, and make change for each other or, even better, practice at the market...predict what the change will be, then buy one item with a real \$1.00 or \$5.00 bill!

Read!

Thursday

This is a paper-free night! Review the spelling words for tomorrow's test. Practice multiplication facts to increase speed and accuracy!.

Read!

Reminder

Due to Standardized Testing, the week of May 6th, we will not have homework and Spelling. We will return to our regular homework and Spelling on the week of May 13th. Please be sure that your child eats a healthy breakfast and comes to school well rested for testing.

Name : _____

Date : _____

Spelling Lesson 29 - Silent Consonants

Word List	Vowels	Syllables	ABC Order
1 knew			
2 walk			
3 wrong			
4 know			
5 climb			
6 knee			
7 write			
8 talk			
9 knot			
10 wrote			
11 laugh			
12 right			
*13 sign			
*14 often			
*15 bought			



Name _____



Read the word in the box. Fill in the circle in front of the word that has the same vowel sound.

1. awning

meat school taught

2. bread

led sea say

3. goose

scout tool book

4. weigh

feel boil late

5. clown

paid loud boat

6. know

room chew goat

7. green

teach bread vein

8. joy

jaw join wood

9. pause

lawn eight leap

10. soak

shout soy know

11. play

main crawl boy

12. mouse

crook broom brown

13. leaves

trees vein threw

14. good

boil bloom look

15. sail

stay draw tried

16. coin

toy shook soon



Understand Plan Solve Check

Temperature

1. How many degrees warmer was it at 2 o'clock?


8 o'clock

2 o'clock



$$70^{\circ}\text{F} - 50^{\circ}\text{F} = 20^{\circ}\text{F}$$


2. The thermometer shows the temperature outside. The temperature inside is 10° warmer. What is the temperature inside?



$$\underline{\quad}^{\circ}\text{F} + \underline{\quad}^{\circ}\text{F} = \underline{\quad}^{\circ}\text{F}$$

Mark the correct answer.

3. What is the temperature?



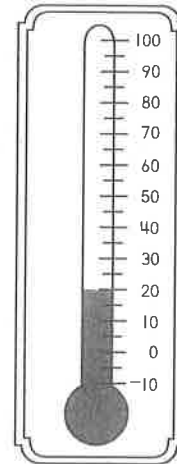
40°F

41°F

45°F

55°F

4. What is the temperature?



10°F

20°F

25°F

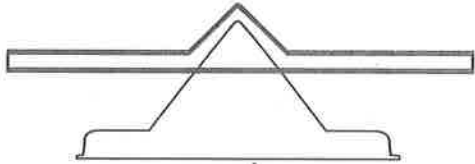
30°F

Understand Plan Solve Check

Reading Strategy • Use Picture Clues



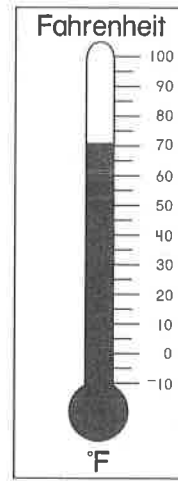
ruler



scale





cup





thermometer

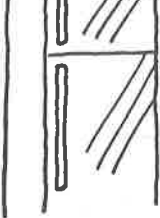
Use picture clues to solve.
Write the name of the tool you would use

1. to find out the temperature on a snowy day. 

2. to find out how much water will fill a bowl. 

3. to find out the mass of a backpack. 

4. to find out how long your pencil is. 

5. to find out the temperature in the freezer. 


Understand

Plan

Solve

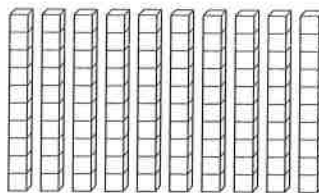
Check

Hundreds




1 hundred

=



10 tens

=



100 ones

Solve.

1. There are 100 stamps in a sheet. Vince buys 900 stamps. How many sheets does he buy?

 9 sheets

2. There are 100 pencils in a box. Bud buys 3 boxes. How many pencils does he buy?

 pencils

3. There are 100 sheets in a pack of paper. Beth buys 5 packs. How many sheets of paper does she buy?


 sheets of paper

4. There are 100 paper clips in a box. Dave buys 700 paper clips. How many boxes does he buy?

 boxes


Mark the correct answer.

5. How many tens are there?



- 3
- 30
- 300

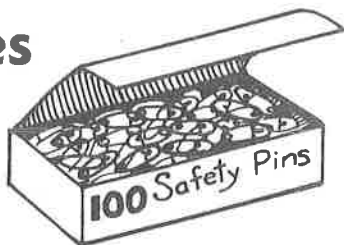
6. How many ones are there?



- 4
- 40
- 400

Understand Plan Solve Check

Hundreds, Tens, and Ones



Solve. Use the fewest boxes.

1. Mr. Morris buys safety pins for 238 people.
What does he buy?

 2 boxes
of 100

 3 boxes
of 10

 8 single
pins

2. Ms. Webster buys 200 safety pins. What does she buy?

 boxes
of 100

 boxes
of 10

 single
pins

3. Mary buys 404 safety pins. What does she buy?

 boxes
of 100

 boxes
of 10

 single
pins

4. George buys 335 safety pins. What does he buy?


 boxes
of 100

 boxes
of 10

 single
pins

Mark the correct answer.

5. Which is the number?




246

462

264

426

6. Which is the number?



423

324

432

342

Understand

Plan

Solve

Check

Place Value

Circle the value of the underlined digit.

1. Marty has 692 paper clips.

900 90 9

2. Maria has 327 books.

700 70 7

3. Kendra has 871 sheets of paper.

100 10 1

4. Rob has 138 staples.

300 30 3

5. Angel has 463 pencils.

600 60 6

6. Russell has 589 erasers.

500 50 5

Mark the most reasonable estimate.

7. _____ people live in my house.

- 4
 40
 400

8. There are _____ children in Miss Smith's class.

- 2
 20
 200

Understand


Plan

Solve

Check

Read and Write Numbers

Write the number.



1. Jan buys 5 boxes of 100, 2 bags of 10, and 2 single bulbs. How many tulip bulbs does she buy?

522

2. Ted buys 9 boxes of 100, 0 bags of 10, and 3 single bulbs. How many tulip bulbs does he buy?

3. Ray buys 6 boxes of 100, 3 bags of 10, and 7 single bulbs. How many lily bulbs does he buy?

4. Sam buys 8 boxes of 100, 5 bags of 10, and 0 single bulbs. How many lily bulbs does he buy?

5. Tom buys 7 boxes of 100, 7 bags of 10, and 1 single bulb. How many iris bulbs does he buy?

6. Kim buys 4 boxes of 100, 8 bags of 10, and 6 single bulbs. How many iris bulbs does she buy?

Mark the correct answer.

7. Colleen buys 6 boxes of 100, 4 bags of 10, and 2 single bulbs. How many tulip bulbs does she buy?

246

462

624

642

8. Bradley buys 3 boxes of 100, 8 bags of 10, and 5 single bulbs. How many tulip bulbs does he buy?

358

385


538

583

Name _____ Date _____

Read the paragraph. Then fill in the bubble that best completes each sentence.

What is a census? A census is a count. Every ten years the U.S. Census Bureau counts people. It also finds out where people live, the kind of work they do, and other facts. The census tells whether the population of a state changes. The number of representatives a state has in Congress depends on its population. Census numbers are helpful in planning new roads, schools, and other things.



1. The main idea of the paragraph is

- A. how Congress changes
- B. why populations change
- C. what the census is

2. A detail that tells more about the main idea is

- A. how many people now live in the U.S.
- B. which states have the most people
- C. how the census numbers are used

3. The best title for this paragraph would be

- A. Every Ten Years
- B. The Census Counts
- C. Where People Live

Read the paragraph. Then fill in the bubble that best completes each sentence.

Beatrix Potter (1866–1943) loved animals. She also loved to draw. As a young girl she kept a sketchbook of plants and family pets. She became a student of nature. Later on Beatrix Potter wrote stories for children. The main characters were animals. Perhaps you have read *The Tale of Peter Rabbit* or *Squirrel Nutkin*.



1. The main idea of the paragraph is

- A. Beatrix Potter's interest in nature
- B. the titles of Beatrix Potter's books
- C. the names of Potter family pets

2. A detail that tells more about the main idea is

- A. how Beatrix Potter learned to draw
- B. what Potter drew in her sketchbook
- C. how the book *Squirrel Nutkin* ends

3. The best title for this paragraph would be

- A. Meet These Animal Characters
- B. The Words of Beatrix Potter
- C. Potter and the Natural World

Monthly Record for:

Sunday	Monday	Tuesday	Wednesday	Thursday	Friday	Saturday

Please record daily reading in minutes (up to a limit of 60 minutes per day). Write the number of minutes, and have an adult initial in each square of the calendar. Total all reading time that has been recorded. You can add across each week and down for the monthly total. Return this log on the last school day of each month with an adult's signature. We will keep track of and reward individual and class progress. Have fun!

Weekly Minutes _____

Weekly Minutes _____

Weekly Minutes _____

Weekly Minutes _____

Weekly Minutes _____

Monthly Total _____

* Adult Signature _____

(I have checked the math for this month!)

1. My Sister is a Sissy

My sister is a sissy,
she's afraid of dogs and cats,
a toad can give her tantrums,
and she's terrified of rats,
she screams at things with stingers,
things that buzz, and things that crawl,
just the shadow of a spider
sends my sister up the wall.

A lizard makes her shiver,
and a turtle makes her squirm,
she positively cringes
at the prospect of a worm,
she's afraid of things with feathers,
she's afraid of things with fur,
she's scared of almost everything—
how come I'm scared of her?

2. THE SIDEWALK RACER

^{or}
On the Skateboard
by Lillian Morrison

Skimming
an asphalt sea
I swerve, I curve, I
sway; I speed to whirring
sound an inch above the
ground; I'm the sailor
and the sail, I'm the
driver and the wheel
I'm the one and only
single engine
human auto
mobile.

3. The Hairy Dog

by Herbert Asquith

My dog's so furry I've not seen
His face for years and years;
His eyes are buried out of sight,
I only guess his ears.

When people ask me for his breed,
I do not know or care;
He has the beauty of them all
Hidden beneath his hair



4. Baloney Belly Billy

Baloney Belly Billy
swallows anything for cash,
if you offer him a penny,
he'll chew paper from the trash,
he'll eat guppies for a nickel,
for a dime, he'll eat a bug,
and a quarter will convince him
that he ought to eat a slug.

I have seen him eat a button,
I have seen him eat a bee,
I have seen him eat three beetles
for a half a dollar fee,
for a dollar he will gladly
eat a lizard off a fence,
just imagine what he'd swallow
for another fifty cents.

5. The Pickety Fence

by David McCord

The pickety fence
The pickety fence
Give it a lick it's
The pickety fence
Give it a lick it's
A clickety fence
Give it a lick it's
A lickety fence
Give it a lick
Give it a lick
Give it a lick
With a rickety stick
Pickety
Pickety
Pickety
Pick

6. Mrs. Peck -Pigeon

by Eleanor Farjeon

Mrs. Peck -Pigeon
is picking for bread,
Bob-bob-bob
Goes her little round head,
Tame as a pussy-cat
In the street,
Step-step-step
Go her little red feet,
With her little red feet
And her little round head,
Mrs. Peck -Pigeon
Goes picking for bread.

7. Ducks' Ditty

by Kenneth Grahame


All along the backwater,
Through the rushes tall,
Ducks are a-dabbling,
Up tails all!

Ducks' tails, drakes' tails
Yellow feet a-quiver,
Yellow bills all out of sight
Busy in the river!

Slushy green undergrowth
Where the roach swim —
Here we keep our larder,
Cool and full and dim.

Everyone for what he likes!
We like to be
Heads down, tails up,
Dabbling free!

High in the blue above
Swifts whirl and call —
We are down a-dabbling
Up tails all!



8. Different Bicycles

by Dorothy Baruch

When I ride my bicycle
I pedal and pedal
Knees up, knees down.
Knees up, knees down.

But when the boy next door
Rides his,
It's whizz —
A chuck a chuck —

And away
He's gone
With his
Knees steady-straight
In one place...
Because —
His bicycle has
A motor fastened on.

9. Trees

by Harry Behn

Trees are the kindest things I know,
They do not harm, they simply grow.

And spread a shade for sleepy cows,
And gather birds among their boughs.

They give us fruit in leaves above,
And wood to make our houses of,


And leaves to burn on Hallowe'en,
And in the Spring new buds of green.

They are the first when day's begun,
To touch the beams of morning sun,

They are the last to hold the light,
When evening changes into night.

And when a moon floats on the sky,
They hum a drowsy lullaby.

Of sleepy children long ago...
Trees are the kindest things I know.



Hello Parents and Students!

A book report is due


May 15, 2013

The book report form is attached.

Please help your child select an appropriate book that is at a comfortable reading level for him/her. Use complete sentences and your neatest printing. Be sure to turn in the report on time. Thank you!



FROM



TO
