

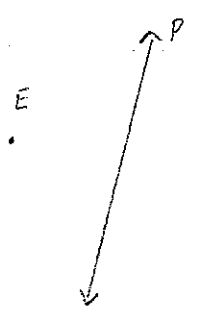

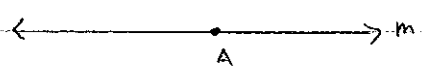


Assn #5

1. Construct the perpendicular bisector for each segment.



2. Construct a perpendicular line to the given line through each given point.



Given: 

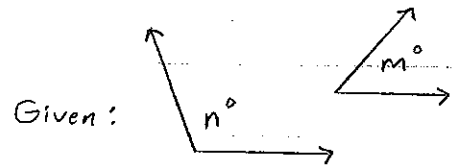
3. Construct a segment whose length is

a.  $x$

b.  $2x$

c.  $3x$

d.  $\frac{1}{2}x$



4. Construct an angle whose measure is

a.  $n^\circ$

b.  $n^\circ + m^\circ$

c.  $2m^\circ + \frac{1}{2}n^\circ$