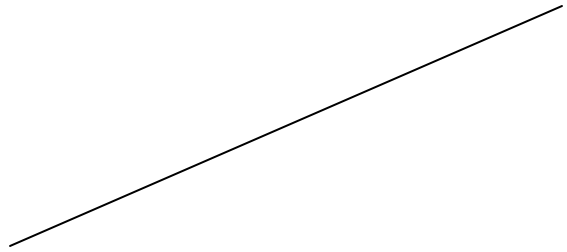


Construct the perpendicular bisector to the following segment

1.



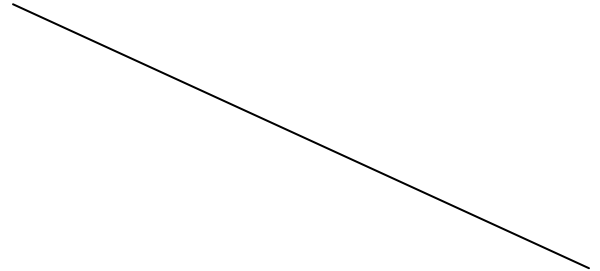
2.



3.

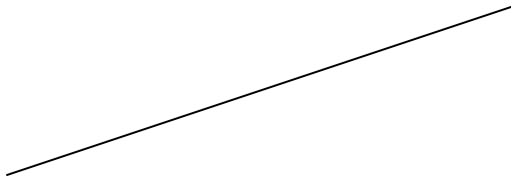


4.

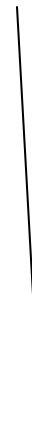


Construct a line perpendicular to the given line and through the given point.

5.

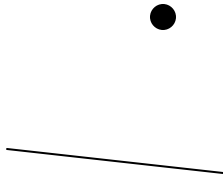


6.

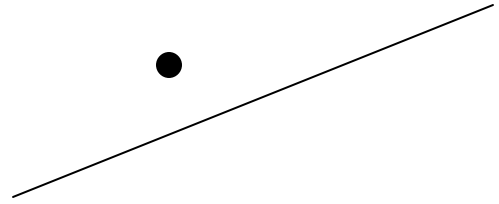


Construct a line perpendicular to the given line and through the given point.

7.




8.

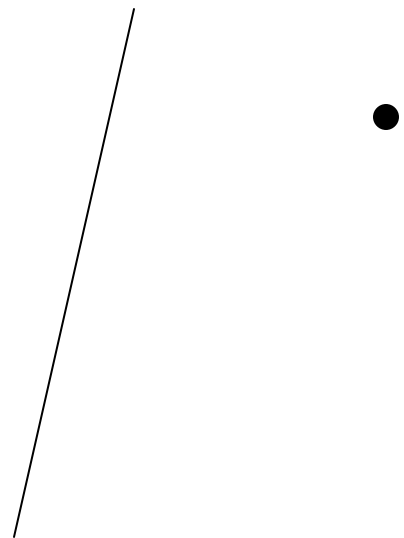


Construct a line parallel to the given line, through the given point

9.



10.



11. Which postulate or theorem guarantees that the lines constructed in #9 and #10 will be parallel to the other line?