

Measuring and Copying Angles Practice

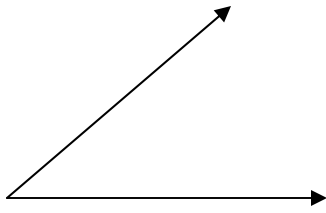
Geometry

Name: _____

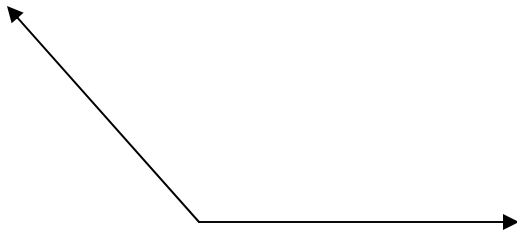
Period: _____

Measure each angle shown below with your protractor, then use your compass and straight edge to construct a copy of the angle.

1.



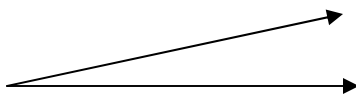
2.



3.



4.



5.

