



Place the following number in order from Least to Greatest.

Answers

- 1) A. 32.4
B. 32.1
C. 32.17
D. 32.769

- 2) A. 55.335
B. 55.47
C. 55.7
D. 55.9

- 3) A. 61.17
B. 60.8
C. 61.383
D. 60.2

- 4) A. 48.3
B. 48.7
C. 48.13
D. 48.755

- 5) A. 2.601
B. 2.7
C. 2
D. 2.17

- 6) A. 13.5
B. 13.837
C. 13.69
D. 12.9

- 7) A. 33.967
B. 33.13
C. 33.4
D. 33.1

- 8) A. 33.2
B. 32.6
C. 33.15
D. 33.113

- 9) A. 37.7
B. 37.735
C. 38.2
D. 37.59

- 10) A. 11
B. 12.85
C. 11.807
D. 12.4

- 11) A. 37.817
B. 36.71
C. 37.5
D. 36

- 12) A. 35.4
B. 34.3
C. 35.121
D. 35.93

- 13) A. 31.4
B. 32.253
C. 32.6
D. 31.25

- 14) A. 55.69
B. 54.8
C. 54
D. 54.805

- 15) A. 20.623
B. 19.6
C. 19.17
D. 19

- 16) A. 39.27
B. 38.3
C. 38.245
D. 39.6

- 17) A. 58.15
B. 57.471
C. 58.7
D. 57.6

- 18) A. 39.41
B. 40.3
C. 39.163
D. 39.4

- 19) A. 67
B. 66.87
C. 66.5
D. 67.729

- 20) A. 99.1
B. 98.19
C. 99.897
D. 99

1. _____

2. _____

3. _____

4. _____

5. _____

6. _____

7. _____

8. _____

9. _____

10. _____

11. _____

12. _____

13. _____

14. _____

15. _____

16. _____

17. _____

18. _____

19. _____

20. _____

Use >, <, and = to make the number sentence true.

Answers

1) 94.64 _____ 95.20

2) 73.14 _____ 73.750

1. _____

3) 28.470 _____ 27.58

4) 89.28 _____ 90.54

2. _____

3. _____

5) 43.51 _____ 42.80

6) 68.13 _____ 67.900

4. _____

5. _____

6. _____

7) 12.890 _____ 11.39

8) 70.260 _____ 70.510

7. _____

8. _____

9) 17.34 _____ 17.92

10) 90.25 _____ 90.360

9. _____

10. _____

11) 43.400 _____ 42.93

12) 48.54 _____ 48.79

11. _____

12. _____

13) 70.90 _____ 70.90

14) 99.65 _____ 98.760

13. _____

14. _____

15) 47.54 _____ 47.57

16) 48.39 _____ 48.69

15. _____

16. _____

17) 64.95 _____ 65.30

18) 23.22 _____ 23.20

17. _____

18. _____



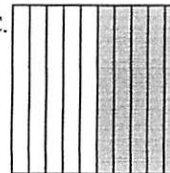

19) 12.62 _____ 12.16

20) 91.62 _____ 90.31

19. _____

20. _____

Put the following boxes in order from least to greatest based on the amount shaded.

Ex) A.  B.  C.  D. 

Smallest $0.1 - A$
 $0.41 - B$
 $0.5 - C$
 Largest $0.62 - D$

Answers

Ex. A, B, C, D

1. _____

2. _____

3. _____


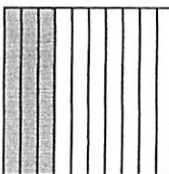


4. _____

5. _____




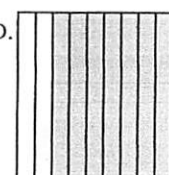
6. _____

7. _____



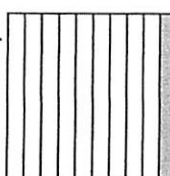

8. _____

1) A.  B.  C.  D. 





Smallest _____
 Largest _____

2) A.  B.  C.  D. 




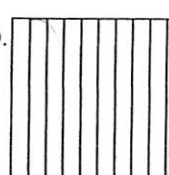
Smallest _____
 Largest _____

3) A.  B.  C.  D. 





Smallest _____
 Largest _____

4) A.  B.  C.  D. 





Smallest _____
 Largest _____

5) A.  B.  C.  D. 





Smallest _____
 Largest _____

6) A.  B.  C.  D. 

Smallest _____
 Largest _____

7) A.  B.  C.  D. 

Smallest _____
 Largest _____

8) A.  B.  C.  D. 

Smallest _____
 Largest _____