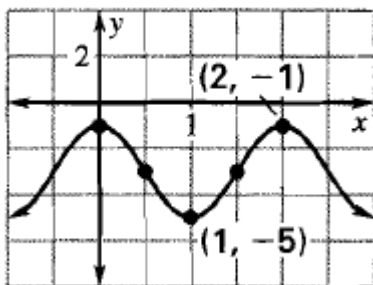
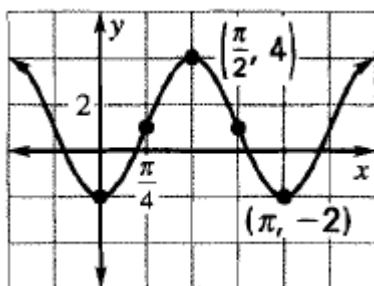


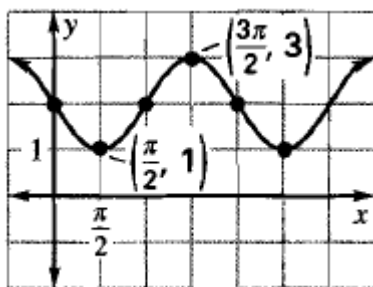
Ex. 1: Write a cosine function for the graph shown.



Ex. 2: Write a sine function for the graph shown.



Ex. 3: Write a sine function and a cosine function for the graph shown.



Ex. 4: Write a tangent function for the graph shown.

