

2nd Grade Homework Packet

April 8 – April 11, 2013

Monday

Study this week's spelling list for Friday's test. Complete the "Spelling ABC" and "Compound Words" worksheets. Have an adult check and sign your homework, after it is corrected. Read!

Tuesday

Study your spelling words. Complete the math pages. Complete "Identifying Main Idea & Details." Have an adult check and sign your homework, after it is corrected. Read!

Wednesday

Study your spelling words. Complete "Around the Globe." And "North America, A Colorful Continent." Have an adult check and sign your homework, after it is corrected. Read!

Thursday

This is a paper-free night! Review the spelling words for tomorrow's test. Practice, play spelling games, and take a test on this week's words. Work on time, money and math facts. Read!

Lesson 26

Compound Words

Spelling Words

1. sometimes
2. everybody
3. football
4. baseball
5. birthday
6. without
7. became
8. rainbow
9. someone
10. something
11. cannot
12. maybe
- * 13. meanwhile
- * 14. themselves
- * 15. blackboard

Name: _____

Date: _____

Spelling Lesson 26 - Compound Words

Word List	Vowels	Syllables	ABC Order
1 sometimes			
2 everybody			
3 football			
4 baseball			
5 birthday			
6 without			
7 became			
8 rainbow			
9 someone			
10 something			
11 cannot			
12 maybe			
*13 meanwhile			
*14 themselves			
*15 blackboard			

Name: _____

$$\begin{array}{r} 54 \\ + 49 \\ \hline \end{array}$$

$$\begin{array}{r} 98 \\ + 83 \\ \hline \end{array}$$

$$\begin{array}{r} 69 \\ + 72 \\ \hline \end{array}$$

$$\begin{array}{r} 49 \\ + 53 \\ \hline \end{array}$$

$$\begin{array}{r} 52 \\ - 13 \\ \hline \end{array}$$

$$\begin{array}{r} 74 \\ - 24 \\ \hline \end{array}$$

$$\begin{array}{r} 54 \\ - 15 \\ \hline \end{array}$$

$$\begin{array}{r} 60 \\ - 13 \\ \hline \end{array}$$

$$\begin{array}{r} 86 \\ + 54 \\ \hline \end{array}$$

$$\begin{array}{r} 69 \\ + 52 \\ \hline \end{array}$$

$$\begin{array}{r} 67 \\ + 48 \\ \hline \end{array}$$

$$\begin{array}{r} 69 \\ + 82 \\ \hline \end{array}$$

$$\begin{array}{r} 63 \\ - 19 \\ \hline \end{array}$$

$$\begin{array}{r} 54 \\ - 26 \\ \hline \end{array}$$

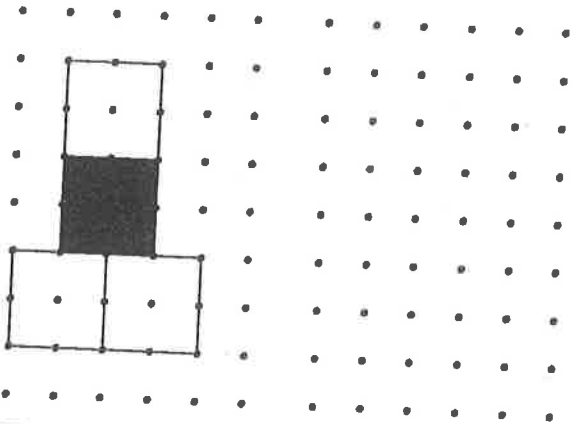
$$\begin{array}{r} 60 \\ - 19 \\ \hline \end{array}$$

$$\begin{array}{r} 72 \\ - 23 \\ \hline \end{array}$$

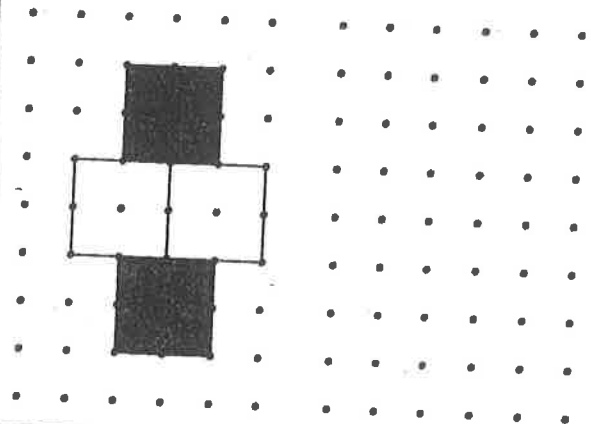
COPYING A PATTERN

DIRECTIONS: Use a pencil and the grid to copy each figure.

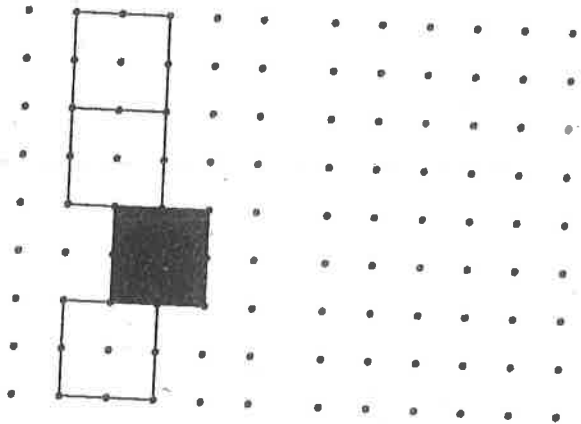
C-1



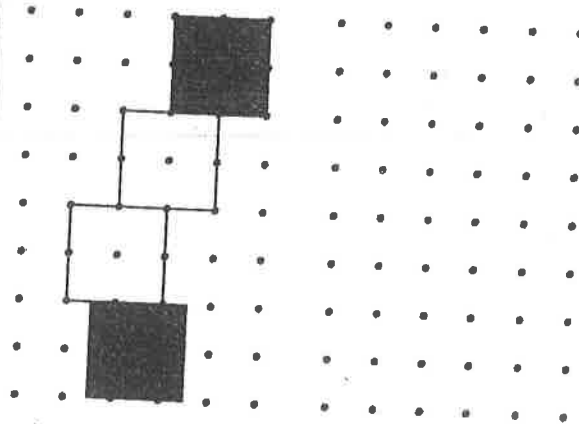
C-2



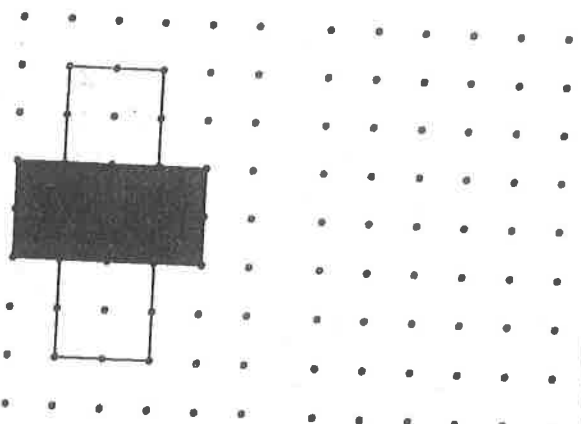
C-3



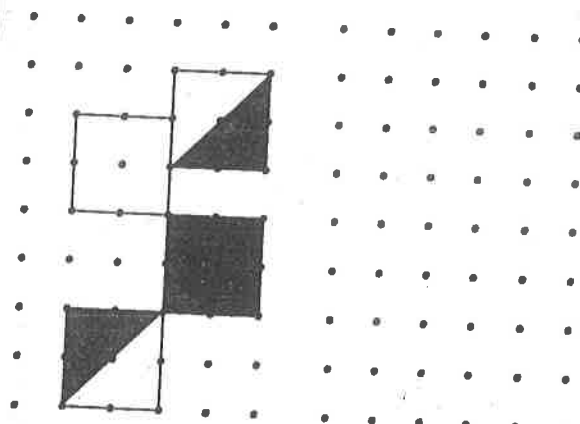
C-4



C-5



C-6



Name _____

Addition and Subtraction Facts: 0 to 18

A. $\begin{array}{r} 13 \\ - 4 \end{array}$ $\begin{array}{r} 4 \\ - 0 \end{array}$ $\begin{array}{r} 8 \\ + 2 \end{array}$ $\begin{array}{r} 14 \\ - 7 \end{array}$ $\begin{array}{r} 1 \\ + 8 \end{array}$ $\begin{array}{r} 9 \\ + 8 \end{array}$ $\begin{array}{r} 5 \\ - 2 \end{array}$ $\begin{array}{r} 10 \\ - 4 \end{array}$ $\begin{array}{r} 8 \\ + 5 \end{array}$ $\begin{array}{r} 7 \\ + 2 \end{array}$

B. $\begin{array}{r} 3 \\ + 0 \end{array}$ $\begin{array}{r} 14 \\ - 8 \end{array}$ $\begin{array}{r} 2 \\ + 2 \end{array}$ $\begin{array}{r} 5 \\ - 0 \end{array}$ $\begin{array}{r} 9 \\ - 7 \end{array}$ $\begin{array}{r} 6 \\ + 0 \end{array}$ $\begin{array}{r} 9 \\ + 3 \end{array}$ $\begin{array}{r} 11 \\ - 3 \end{array}$ $\begin{array}{r} 0 \\ + 4 \end{array}$ $\begin{array}{r} 7 \\ - 7 \end{array}$

C. $\begin{array}{r} 6 \\ - 3 \end{array}$ $\begin{array}{r} 0 \\ + 1 \end{array}$ $\begin{array}{r} 6 \\ + 9 \end{array}$ $\begin{array}{r} 5 \\ - 4 \end{array}$ $\begin{array}{r} 11 \\ - 2 \end{array}$ $\begin{array}{r} 2 \\ + 9 \end{array}$ $\begin{array}{r} 5 \\ + 5 \end{array}$ $\begin{array}{r} 8 \\ - 5 \end{array}$ $\begin{array}{r} 15 \\ - 7 \end{array}$ $\begin{array}{r} 4 \\ + 6 \end{array}$

D. $\begin{array}{r} 3 \\ - 3 \end{array}$ $\begin{array}{r} 3 \\ + 8 \end{array}$ $\begin{array}{r} 7 \\ - 5 \end{array}$ $\begin{array}{r} 14 \\ - 5 \end{array}$ $\begin{array}{r} 4 \\ + 9 \end{array}$ $\begin{array}{r} 0 \\ - 0 \end{array}$ $\begin{array}{r} 9 \\ - 1 \end{array}$ $\begin{array}{r} 2 \\ + 4 \end{array}$ $\begin{array}{r} 7 \\ + 0 \end{array}$ $\begin{array}{r} 11 \\ - 6 \end{array}$

E. $\begin{array}{r} 8 \\ - 2 \end{array}$ $\begin{array}{r} 9 \\ + 0 \end{array}$ $\begin{array}{r} 4 \\ + 1 \end{array}$ $\begin{array}{r} 6 \\ - 2 \end{array}$ $\begin{array}{r} 0 \\ + 8 \end{array}$ $\begin{array}{r} 13 \\ - 7 \end{array}$ $\begin{array}{r} 12 \\ - 8 \end{array}$ $\begin{array}{r} 7 \\ + 6 \end{array}$ $\begin{array}{r} 8 \\ + 8 \end{array}$ $\begin{array}{r} 1 \\ + 2 \end{array}$

F. $\begin{array}{r} 1 \\ + 1 \end{array}$ $\begin{array}{r} 2 \\ - 0 \end{array}$ $\begin{array}{r} 8 \\ + 4 \end{array}$ $\begin{array}{r} 9 \\ - 4 \end{array}$ $\begin{array}{r} 3 \\ + 7 \end{array}$ $\begin{array}{r} 4 \\ + 5 \end{array}$ $\begin{array}{r} 7 \\ - 6 \end{array}$ $\begin{array}{r} 6 \\ + 3 \end{array}$ $\begin{array}{r} 9 \\ + 1 \end{array}$ $\begin{array}{r} 1 \\ - 0 \end{array}$

G. $\begin{array}{r} 8 \\ - 0 \end{array}$ $\begin{array}{r} 7 \\ + 8 \end{array}$ $\begin{array}{r} 2 \\ + 3 \end{array}$ $\begin{array}{r} 12 \\ - 5 \end{array}$ $\begin{array}{r} 5 \\ + 7 \end{array}$ $\begin{array}{r} 9 \\ - 6 \end{array}$ $\begin{array}{r} 0 \\ + 2 \end{array}$ $\begin{array}{r} 16 \\ - 9 \end{array}$ $\begin{array}{r} 8 \\ + 6 \end{array}$ $\begin{array}{r} 5 \\ + 2 \end{array}$

H. $\begin{array}{r} 1 \\ + 7 \end{array}$ $\begin{array}{r} 10 \\ - 8 \end{array}$ $\begin{array}{r} 7 \\ - 3 \end{array}$ $\begin{array}{r} 6 \\ + 1 \end{array}$ $\begin{array}{r} 10 \\ - 9 \end{array}$ $\begin{array}{r} 12 \\ - 6 \end{array}$ $\begin{array}{r} 18 \\ - 9 \end{array}$ $\begin{array}{r} 3 \\ + 1 \end{array}$ $\begin{array}{r} 12 \\ - 9 \end{array}$ $\begin{array}{r} 5 \\ + 3 \end{array}$

I. $\begin{array}{r} 6 \\ - 1 \end{array}$ $\begin{array}{r} 9 \\ - 9 \end{array}$ $\begin{array}{r} 0 \\ + 5 \end{array}$ $\begin{array}{r} 13 \\ - 8 \end{array}$ $\begin{array}{r} 6 \\ + 5 \end{array}$ $\begin{array}{r} 5 \\ + 9 \end{array}$ $\begin{array}{r} 4 \\ - 3 \end{array}$ $\begin{array}{r} 7 \\ + 4 \end{array}$ $\begin{array}{r} 6 \\ - 6 \end{array}$ $\begin{array}{r} 11 \\ - 7 \end{array}$

J. $\begin{array}{r} 3 \\ + 4 \end{array}$ $\begin{array}{r} 15 \\ - 6 \end{array}$ $\begin{array}{r} 17 \\ - 9 \end{array}$ $\begin{array}{r} 9 \\ + 7 \end{array}$ $\begin{array}{r} 2 \\ + 6 \end{array}$ $\begin{array}{r} 3 \\ - 1 \end{array}$ $\begin{array}{r} 10 \\ - 3 \end{array}$ $\begin{array}{r} 1 \\ + 5 \end{array}$ $\begin{array}{r} 4 \\ + 4 \end{array}$ $\begin{array}{r} 8 \\ - 1 \end{array}$

Minutes

1	2	3	4	5
---	---	---	---	---

Score

--

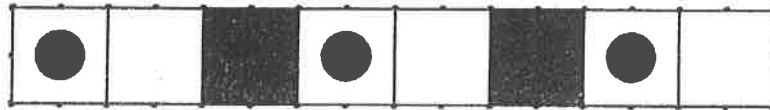
COPYING A PATTERN

DIRECTIONS: Copy each figure pattern.

C-7




C-8



C-9



C-10



C-11

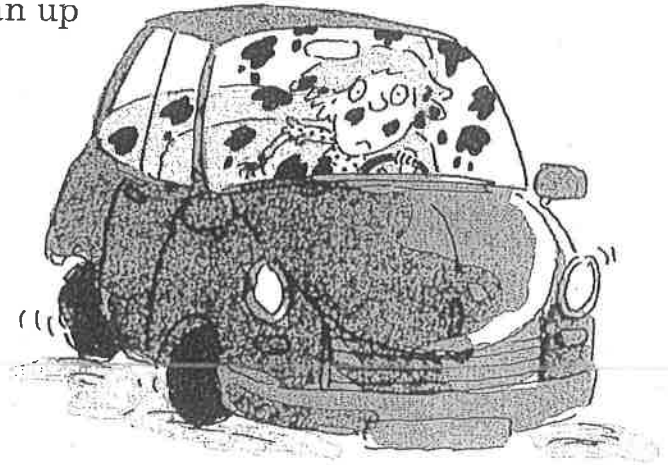


Name _____

Date _____

Read the paragraph. Then fill in the bubble that best completes each sentence.

What foods cause the most problems in a car? Chocolate is one. It gets all over things. When drivers try to clean up the mess, they often have accidents. Hot drinks such as coffee are also dangerous. Why? They spill. Greasy foods cause trouble when they drip. Jelly doughnuts cause problems too. Can you guess why?



1. The main idea of the paragraph is

- A. foods that are good for car rides
- B. the problems caused by chocolate
- C. foods that cause problems in cars

2. A detail that tells more about the main idea is


- A. greasy foods that drip cause problems
- B. drivers should pay attention to the road
- C. cell phones are dangerous in cars

3. The best title for this paragraph would be

- A. Chocolate Causes Accidents
- B. Please Eat Neatly
- C. Messy Foods in Cars

Read the paragraph. Then fill in the bubble that best completes each sentence.

Community names often have words for water in them. For example, Riverview is a town in Kansas. Running Springs is in California. You'll find Bay City in Michigan. Storm Lake is in Iowa, Great Falls is in Montana, and Brookfield is in Vermont. Where is Silver Creek? Why, it's in Mississippi.



1. The main idea of the paragraph is

- A. where to find Silver Creek
- B. names of places with water words
- C. different bodies of water in states

2. A detail that tells more about the main idea is

- A. which state has the most bodies of water
- B. in which state you'll find Bay City
- C. why water words appear in names

3. The best title for this paragraph would be

- A. Where Is Storm Lake?
- B. Water Words in Place Names
- C. How Communities Are Named

Name _____

Skill: Continents

Around the Globe

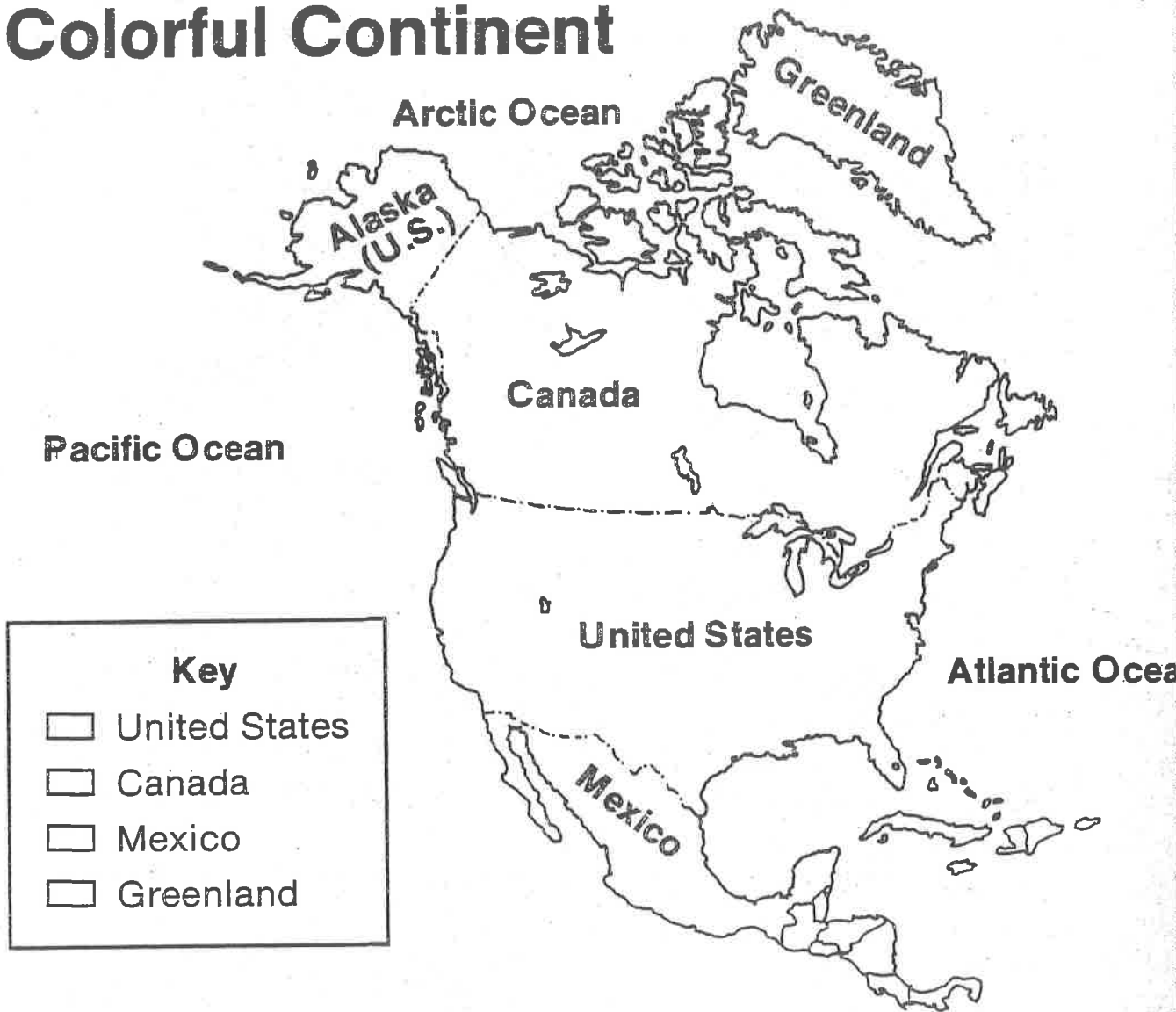


The world is divided into seven large land masses. These big areas are called **continents**. Their names are Asia, Africa, Europe, North America, South America, Australia, and Antarctica. Asia is the largest continent. More than half of the world's people live there. No one lives on Antarctica because it's too cold!

The map shows where some students were born. Fill in the table below with the correct continent names.

Names	Continents Where They Were Born
Carlos	
Ivan	
Tanya	
Mike	
Kim	
Marco	
Maria	
Joyce	

North America, A Colorful Continent



Choose a different color for each place listed on the key and color the boxes next to each name. Then color the land areas on the map to match the key.

1. What country is north of the United States? _____

2. What country is south of the United States? _____

3. What large island is north of Canada? _____