

2nd Grade Homework Packet

October 30 – November 2

Tuesday

Study this week's spelling list for Friday's test. Review math facts. Complete the spelling worksheet. Also, complete both sides of the "o/magic e" sheet. Have an adult check and sign your homework. Read!

Wednesday

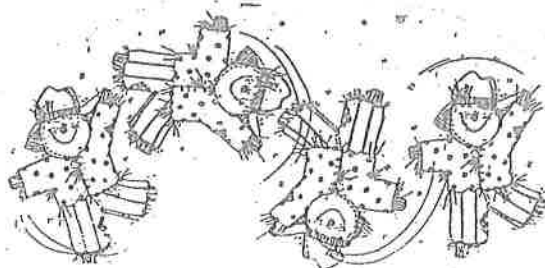
Complete the math sheet reviewing lessons 6.3 and 6.4. Also, complete both sides of the animal Weely Reader worksheet. Have an adult check and sign your homework. Read!

Thursday

This is a paper-free night. Be sure to read at least 20 minutes, study for the spelling test tomorrow, and review your math facts.

Reminder

No school for students on Monday,
October 29.



Lesson 9

Long Vowel o

Spelling Words

1. low
2. joke
3. bone
4. coat
5. mow
6. goat
7. rope
8. row
9. drove
10. soap
- * 11. tomorrow
- * 12. wonderful





Name: _____

Date: _____

'o / magic e' missing vowels

Fill in the missing vowels and read the words.

1. cl-s- _____

11. n-s- _____

2. gl-b- _____

12. -l-n- _____

3. h-p- _____

13. n-t- _____

4. h-m- _____

14. thr-n- _____

5. sm-k- _____

15. th-s- _____

6. b-n- _____

16. wr-t- _____

7. ph-n- _____

17. -p-n _____

8. wh-l- _____

18. fr-z- _____

9. str-k- _____

19. h-l- _____

10. j-k- _____

20. st-n- _____

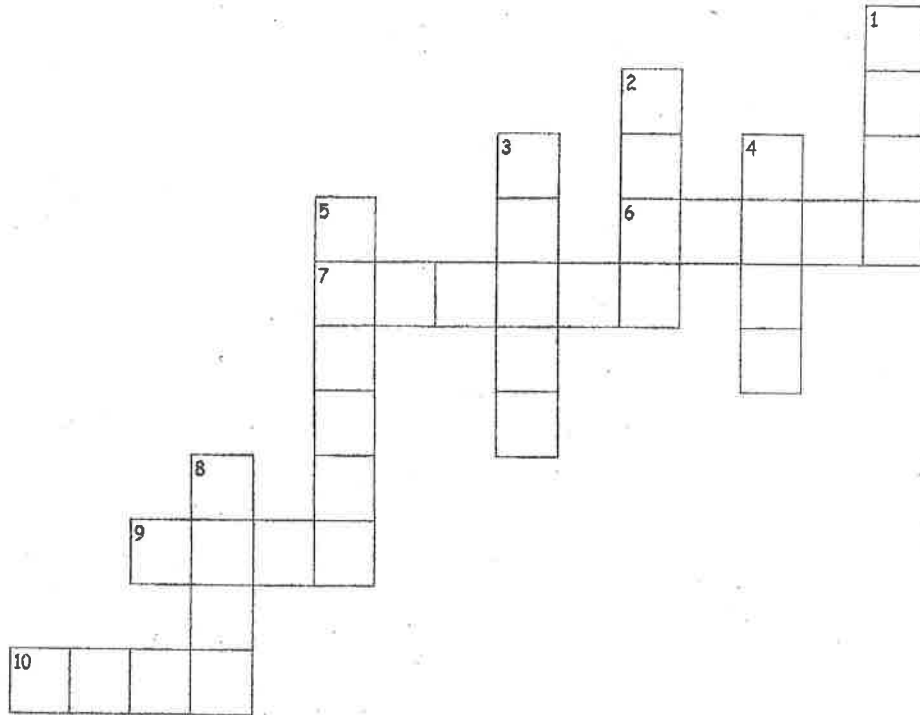


Name: _____

Date: _____

'o/magic e' crossword

Solve the clues to complete the crossword.



ACROSS

6. Might come out of a chimney.
7. A special seat for a King or Queen.
9. The bottom of a shoe.
10. Used to smell.


DOWN

1. Told to make people laugh.
2. You might use one to water the garden.
3. By yourself.
4. You might have ice-cream in one.
5. You might do this to a furry pet.
8. Used to tie things.

Reading Strategy • Use Graphic Aids

Tally tables and graphs can help you show information.
This tally table shows which fruits some children like best.

Our Favorite Fruit	
apple	
banana	
grapes	
orange	



Use the tally table or the graph to answer the questions.

banana

1. What is the favorite fruit of most children?

2. How many children in all like bananas or oranges the best?

___ + ___ = ___

3. How many in all like bananas or grapes the best?

___ + ___ = ___

4. How many more chose bananas than chose grapes?

___ - ___ = ___

5. How many more chose grapes than chose oranges?

6. How many children voted for their favorite fruit?

Understand

Plan

Solve

Check

Take a Survey

Anna asks 10 classmates which sport is their favorite. She fills in the tally table to show their answers.

Favorite Sports	
baseball	
soccer	
basketball	

Use the tally table to fill in the graph.

1. Look at the table.
Count the tally marks.

 2 like baseball the best.

 like soccer the best.

 like basketball the best.

2. Fill in the graph.

3. Check the graph.
Make sure it matches the table.

Favorite Sports						
baseball						
soccer						
basketball						
	0	1	2	3	4	5

Use the graph. Solve.

4. How many more classmates chose soccer than chose baseball?

 more classmates

5. How many classmates in all like baseball or basketball the best?

 classmates

WR Test Yourself!

Weekly Reader Literacy Skills Assessment


Section 3: Reading Comprehension

Directions: Read the story, and study the diagram. Then fill in the circle next to the best answer to each question.

Bears in Winter

Most bears **hibernate** (HIGH-ber-nayt). That means they sleep through the winter. Bears hibernate when it gets cold and it is hard to find food.

In the fall, bears eat to build up fat. Before winter, they go into caves called dens to hibernate. They breathe slower, and their hearts beat slower. Bears do not need to eat or drink when they hibernate. They use their fat to stay alive. Bears wake up in the spring when the weather is warmer.



Parts of a Den

chamber—an open space where a bear sleeps

twigs—small branches of trees that soften the ground and keep a bear warm

1. When do bears hibernate?

- (A) in the summer
- (B) in the winter
- (C) in the evening

2. Why do bears put twigs in their dens?

- (A) to keep other animals away
- (B) to eat as a snack
- (C) to soften the ground and to stay warm

3. What would a bear most likely do after hibernating?

- (A) find food
- (B) take a nap
- (C) collect twigs

4. What is the main idea of this story?

- (A) Bears sleep in dens.
- (B) Bears hibernate in the winter.
- (C) Bears eat a lot of food.

Name _____

Fast Facts About a Fast Cat


Read about the cheetah. Then answer the questions below.

A Fast Cat

The cheetah belongs to the cat family, but it has a doglike shape. In addition to being the fastest land animal, the cheetah has excellent eyesight. That helps it hunt for food and watch for danger.

A young cheetah, or **cub**, stays with its mother until it is almost fully grown. The cub learns to hunt and to defend itself.

The cheetah is **endangered**, or dying out. That is because people have been taking over its habitat in the African grasslands to build farms.



1. To which family does the cheetah belong?

- Ⓐ the cat family
- Ⓑ the dog family

2. Which special feature helps a cheetah hunt?

- Ⓐ excellent eyesight
- Ⓑ thick fur

3. Why does a cheetah cub stay with its mother until it is almost fully grown?

- Ⓐ so it doesn't grow up too fast
- Ⓑ so it can learn to hunt

4. What does the word *endangered* mean?

- Ⓐ dying out
- Ⓑ dangerous

5. Where do cheetahs live?

- Ⓐ in the forest
- Ⓑ in the grasslands

TRY THIS!

The cheetah is a fast runner. What are some things that you can do really well?