

## **2<sup>nd</sup> Grade Homework Packet**

**April 28 - May 1, 2014**

### **Monday**

Study this week's spelling list for Friday's test. Complete the "Spelling ABC" worksheet and the "Dictionary Practice" worksheet. Have an adult check your homework for errors, and sign after you correct it. Read 20 minutes.

### **Tuesday**

Complete the math pages 99 to 102. Have an adult check your homework for errors, and sign after you correct it. Read 20 minutes.

### **Wednesday**

Tonight, you will do "family homework". Complete 2 "Identifying Main Idea & Details" worksheets. Complete the math pages 103 and 104. Have an adult check all work, then sign after you correct it. Read 20 minutes.

### **Thursday**

This is a paper-free night! Review the spelling words to be ready for tomorrow's test. Practice, play spelling games, and take a test on this week's words. Work on time, money, and math facts. Read 20 minutes.

Name : \_\_\_\_\_

Date : \_\_\_\_\_

# \_\_\_\_\_

Spelling Lesson 29 - Silent Consonants

Word List

Vowels

Syllables

ABC Order

	Word List	Vowels	Syllables	ABC Order
1	knew			
2	walk			
3	wrong			
4	know			
5	climb			
6	knee			
7	write			
8	talk			
9	knot			
10	wrote			
11	laugh			
12	right			
*13	sign			
*14	often			
*15	bought			

Name \_\_\_\_\_

# Dictionary Practice

## Spelling Lesson 29 – Silent Letters

Use the **guide words** in a dictionary to find each word on this list, and write down those words and the page number on which you find each word.

Word	Beginning Guide Word	Ending Guide Word	Page Number
knew			
walk			
wrong			
know			
climb			
knee			
write			
talk			
knot			
wrote			
laugh			
right			
sign			
often			
bought			


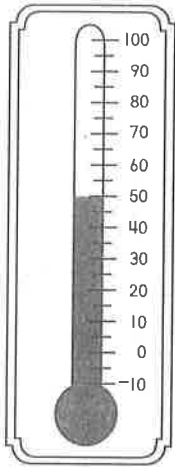
Understand Plan Solve Check

# Temperature

1. How many degrees warmer was it at 2 o'clock?


8 o'clock

2 o'clock



$$70^{\circ}\text{F} - 50^{\circ}\text{F} = 20^{\circ}\text{F}$$


2. The thermometer shows the temperature outside. The temperature inside is 10° warmer. What is the temperature inside?



$$\underline{\quad}^{\circ}\text{F} + \underline{\quad}^{\circ}\text{F} = \underline{\quad}^{\circ}\text{F}$$

Mark the correct answer.

3. What is the temperature?




40°F

41°F

45°F

55°F

4. What is the temperature?



10°F


20°F

25°F

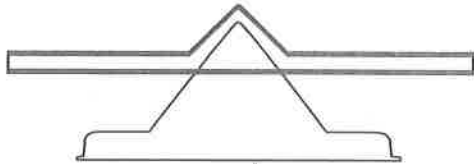
30°F

Understand Plan Solve Check

# Reading Strategy • Use Picture Clues




ruler



scale



cup



thermometer

Use picture clues to solve.  
Write the name of the tool you would use

- 1. to find out the temperature on a snowy day. 


---



---



---

- 2. to find out how much water will fill a bowl. 


---



---



---

- 3. to find out the mass of a backpack. 


---



---



---

- 4. to find out how long your pencil is. 


---



---



---

- 5. to find out the temperature in the freezer. 

---



---



---


Understand

Plan

Solve

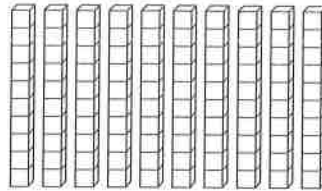
Check

# Hundreds



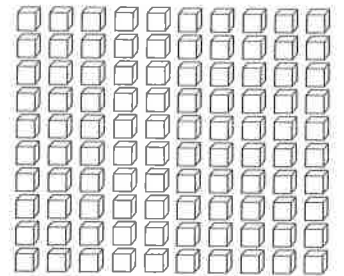
1 hundred

=



10 tens

=



100 ones

Solve.

1. There are 100 stamps in a sheet. Vince buys 900 stamps. How many sheets does he buy?

9 sheets

2. There are 100 pencils in a box. Bud buys 3 boxes. How many pencils does he buy?

\_\_\_\_\_ pencils

3. There are 100 sheets in a pack of paper. Beth buys 5 packs. How many sheets of paper does she buy?


\_\_\_\_\_ sheets of paper

4. There are 100 paper clips in a box. Dave buys 700 paper clips. How many boxes does he buy?

\_\_\_\_\_ boxes

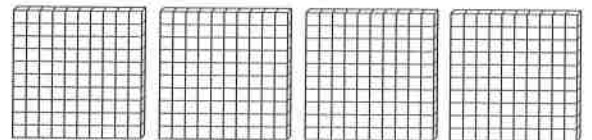
Mark the correct answer.

5. How many tens are there?



- 3
- 30
- 300

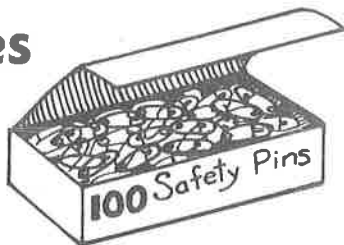
6. How many ones are there?



- 4
- 40
- 400

Understand Plan Solve Check

# Hundreds, Tens, and Ones



Solve. Use the fewest boxes.

1. Mr. Morris buys safety pins for 238 people. What does he buy?

  2   boxes of 100

  3   boxes of 10

  8   single pins

2. Ms. Webster buys 200 safety pins. What does she buy?

       boxes of 100

       boxes of 10

       single pins

3. Mary buys 404 safety pins. What does she buy?

       boxes of 100

       boxes of 10

       single pins

4. George buys 335 safety pins. What does he buy?


       boxes of 100

       boxes of 10

       single pins

Mark the correct answer.

5. Which is the number?




246

462

264

426

6. Which is the number?



423

324

432

342

**Understand** **Plan** **Solve** **Check**

## Place Value

Circle the value of the underlined digit.

1. Marty has 692 paper clips.

900    90    9

2. Maria has 327 books.

700    70    7

3. Kendra has 871 sheets of paper.

100    10    1

4. Rob has 138 staples.

300    30    3

5. Angel has 463 pencils.

600    60    6

6. Russell has 589 erasers.

500    50    5

Mark the most reasonable estimate.

7. \_\_\_\_\_ people live in my house.

- 4  
 40  
 400

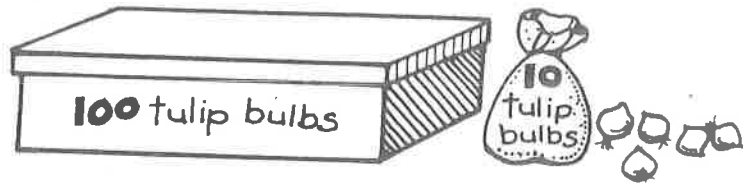
8. There are \_\_\_\_\_ children in Miss Smith's class.

- 2  
 20  
 200

Understand Plan Solve Check

## Read and Write Numbers

Write the number.



1. Jan buys 5 boxes of 100, 2 bags of 10, and 2 single bulbs. How many tulip bulbs does she buy?

522

2. Ted buys 9 boxes of 100, 0 bags of 10, and 3 single bulbs. How many tulip bulbs does he buy?

\_\_\_\_\_

3. Ray buys 6 boxes of 100, 3 bags of 10, and 7 single bulbs. How many lily bulbs does he buy?

\_\_\_\_\_

4. Sam buys 8 boxes of 100, 5 bags of 10, and 0 single bulbs. How many lily bulbs does he buy?

\_\_\_\_\_

5. Tom buys 7 boxes of 100, 7 bags of 10, and 1 single bulb. How many iris bulbs does he buy?

\_\_\_\_\_

6. Kim buys 4 boxes of 100, 8 bags of 10, and 6 single bulbs. How many iris bulbs does she buy?

\_\_\_\_\_

Mark the correct answer.

7. Colleen buys 6 boxes of 100, 4 bags of 10, and 2 single bulbs. How many tulip bulbs does she buy?

246

462

624

642

8. Bradley buys 3 boxes of 100, 8 bags of 10, and 5 single bulbs. How many tulip bulbs does he buy?

358

385

538

583

Read the paragraph. Then fill in the bubble that best completes each sentence.

**B**eatrix Potter (1866–1943) loved animals. She also loved to draw. As a young girl she kept a sketchbook of plants and family pets. She became a student of nature. Later on Beatrix Potter wrote stories for children. The main characters were animals. Perhaps you have read *The Tale of Peter Rabbit* or *Squirrel Nutkin*.



1. The main idea of the paragraph is

- A. Beatrix Potter's interest in nature
- B. the titles of Beatrix Potter's books
- C. the names of Potter family pets

2. A detail that tells more about the main idea is

- A. how Beatrix Potter learned to draw
- B. what Potter drew in her sketchbook
- C. how the book *Squirrel Nutkin* ends

3. The best title for this paragraph would be


- A. Meet These Animal Characters
- B. The Words of Beatrix Potter
- C. Potter and the Natural World

Name \_\_\_\_\_

Date \_\_\_\_\_

Read the paragraph. Then fill in the bubble that best completes each sentence.

**W**hat is a census? A census is a count. Every ten years the U.S. Census Bureau counts people. It also finds out where people live, the kind of work they do, and other facts. The census tells whether the population of a state changes. The number of representatives a state has in Congress depends on its population. Census numbers are helpful in planning new roads, schools, and other things.



1. The main idea of the paragraph is

- A. how Congress changes
- B. why populations change
- C. what the census is

2. A detail that tells more about the main idea is

- A. how many people now live in the U.S.
- B. which states have the most people
- C. how the census numbers are used

3. The best title for this paragraph would be

- A. Every Ten Years
- B. The Census Counts
- C. Where People Live