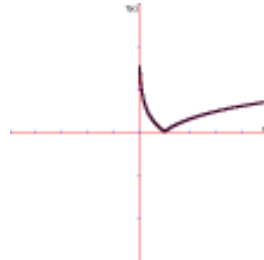


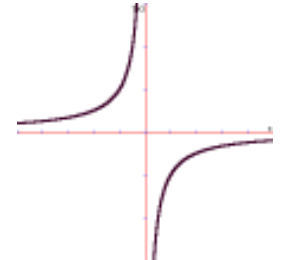
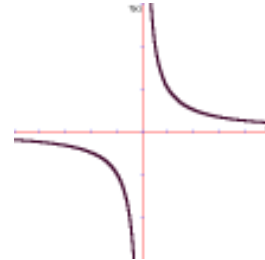
$y = f(x)$

$y = ?$



$y = f(x)$

$y = ?$



**Using symmetry, identify as many other points as you can.**

