



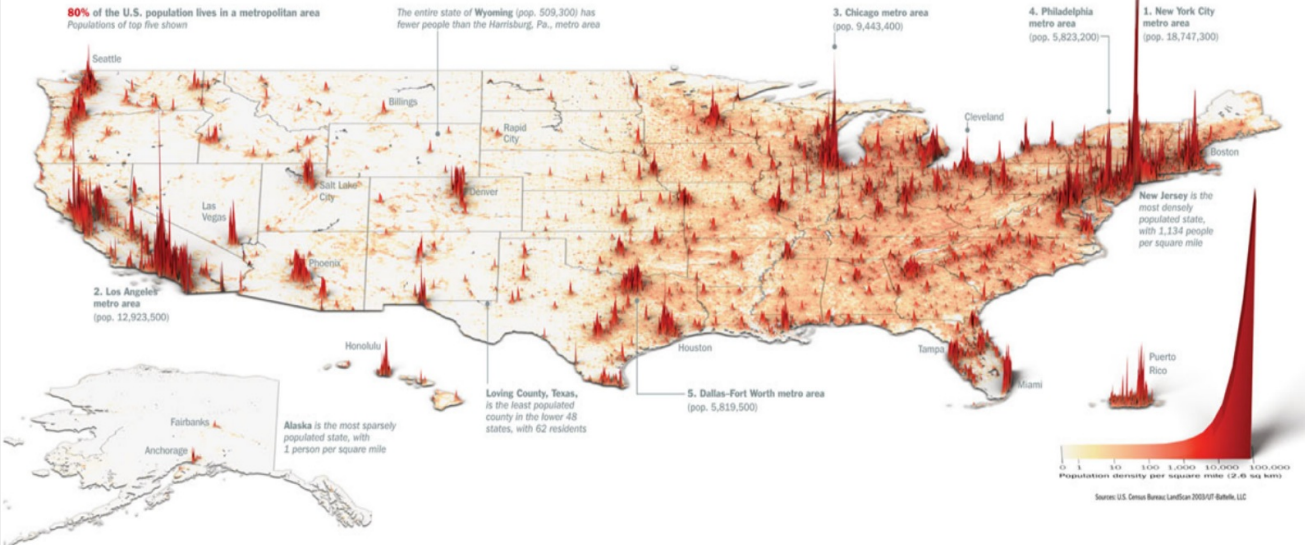
Population

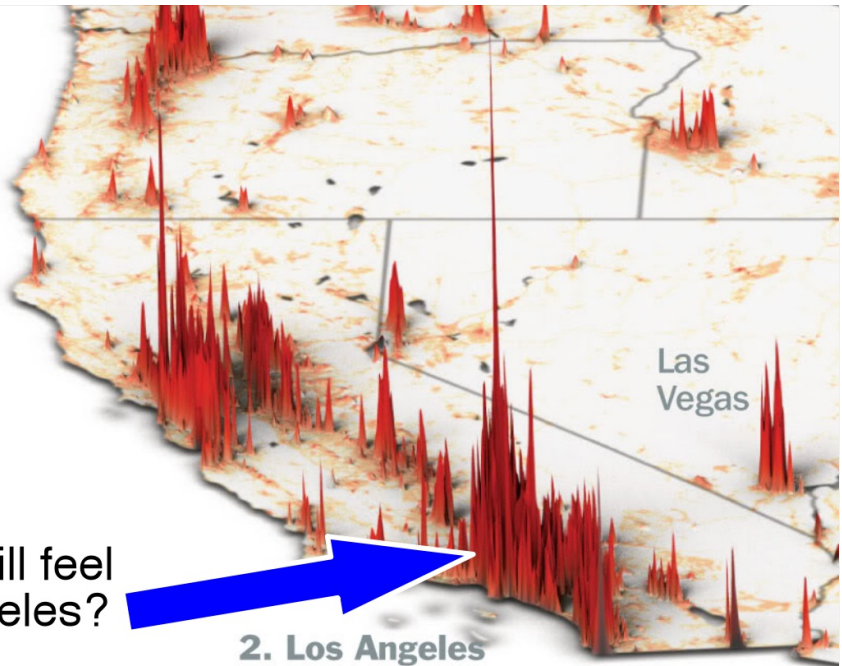
Where We Live...

Unlike many developed countries, the U.S. keeps growing. We are also moving south and west. But compared with China or India, the nation is a vast prairie

Our families are getting smaller—with one vital exception. Compared with those of Europe and Japan, the U.S. population is younger and more colorful because of the continued arrival of immigrants and their higher-than-average birthrates. Of the 100 million Americans who will join us in the next 37 years, half will be immigrants or their children. In the next few decades, 97% of the world's population growth will occur in the developing world; the U.S. is the largest developed country in the world that is still growing at a healthy clip. That matters, strategically, economical-

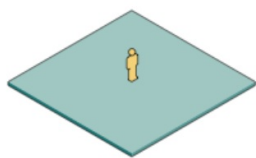
Ala.; Possum Trot, Ky.; or Lonelyville, N.Y. But they are all probably close to someone's idea of paradise. —By Nancy Gibbs





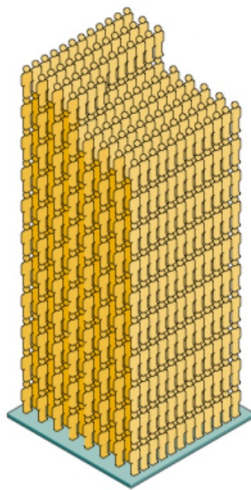
How do you think it will feel like to live in Los Angeles?

2. Los Angeles



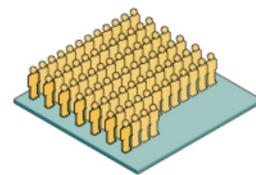
Alaska

(average of one person per square mile)



New Jersey

(average of 1,000 people per square mile)



Distributing our population evenly
(average of 76 people per square mile)

What is the word for this?

Population density - the number of persons living per unit of an area

Continue with your country

Use internet on your laptop. Go to this website:

www.nationmaster.com



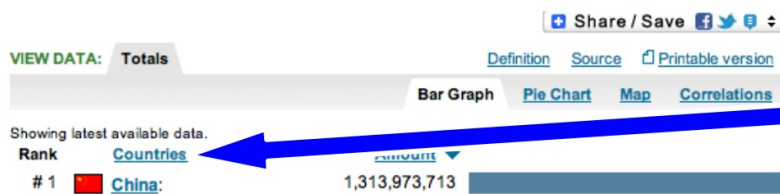
Click here and choose **"People"**

THEN



Click here and choose **"Total Population"** then click **"Go"**

THEN



Click on **"Countries"**

Scroll down and find your country.

THEN



That is how many people live in your country.

What does that mean?

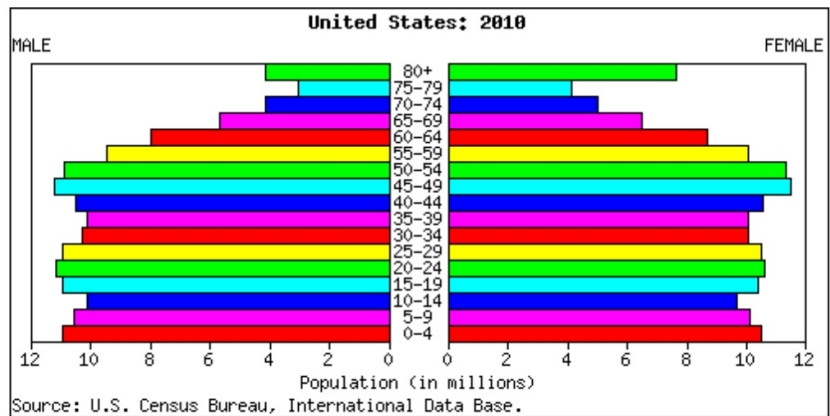
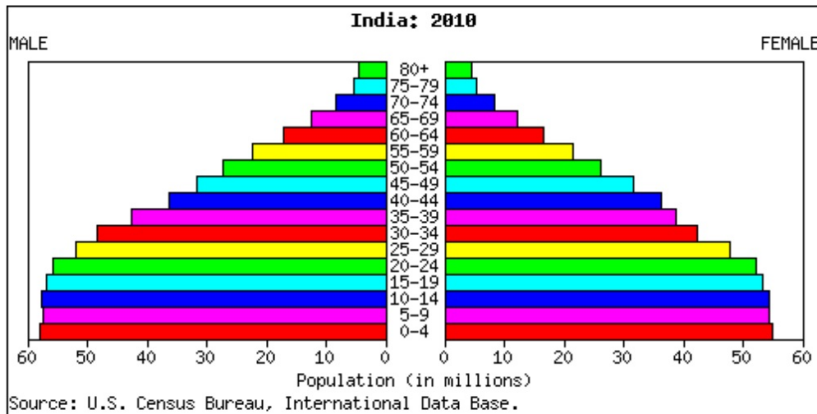
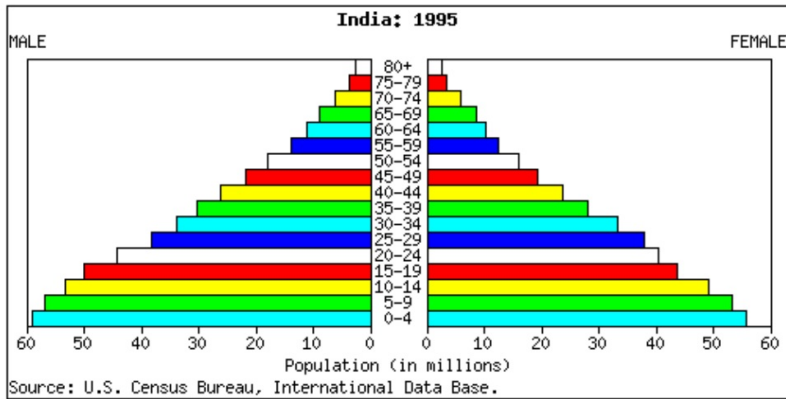
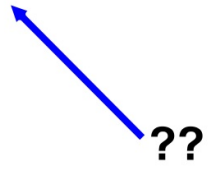
Country Demographics:

Total Population: _____

It means information of a population.

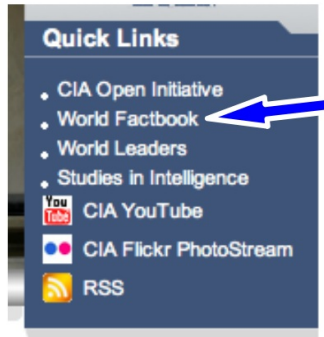


Population Pyramid



More information about your country...

www.cia.gov



Click here.



Click here and choose your country.

A screenshot of the CIA World Factbook page for India. The page has a navigation bar with 'ABOUT', 'REFERENCES', 'APPENDICES', 'FAQs', and 'CONTACT'. Below the navigation bar, there is a header 'SOUTH ASIA :: INDIA' and a sub-header 'PAGE LAST UPDATED ON OCTOBER 18, 2011'. The main content area features a flag of India, a map of India, and a larger map of South Asia. Below the maps, there are sections for 'Introduction :: INDIA', 'Geography :: INDIA', 'People and Society :: INDIA', 'Government :: INDIA', and 'Economy :: INDIA'. Each section has a small square icon to its right.

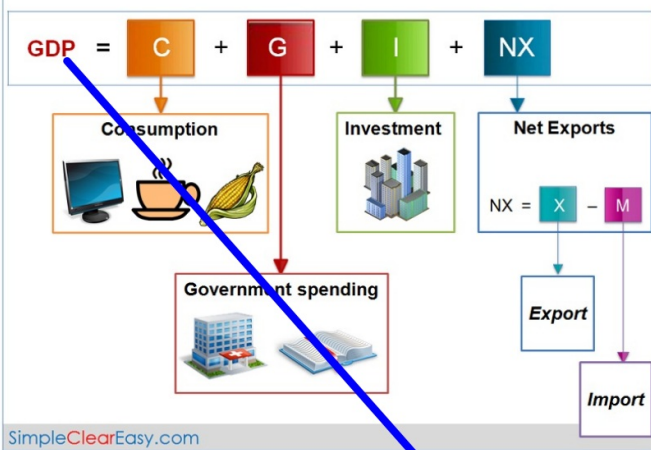
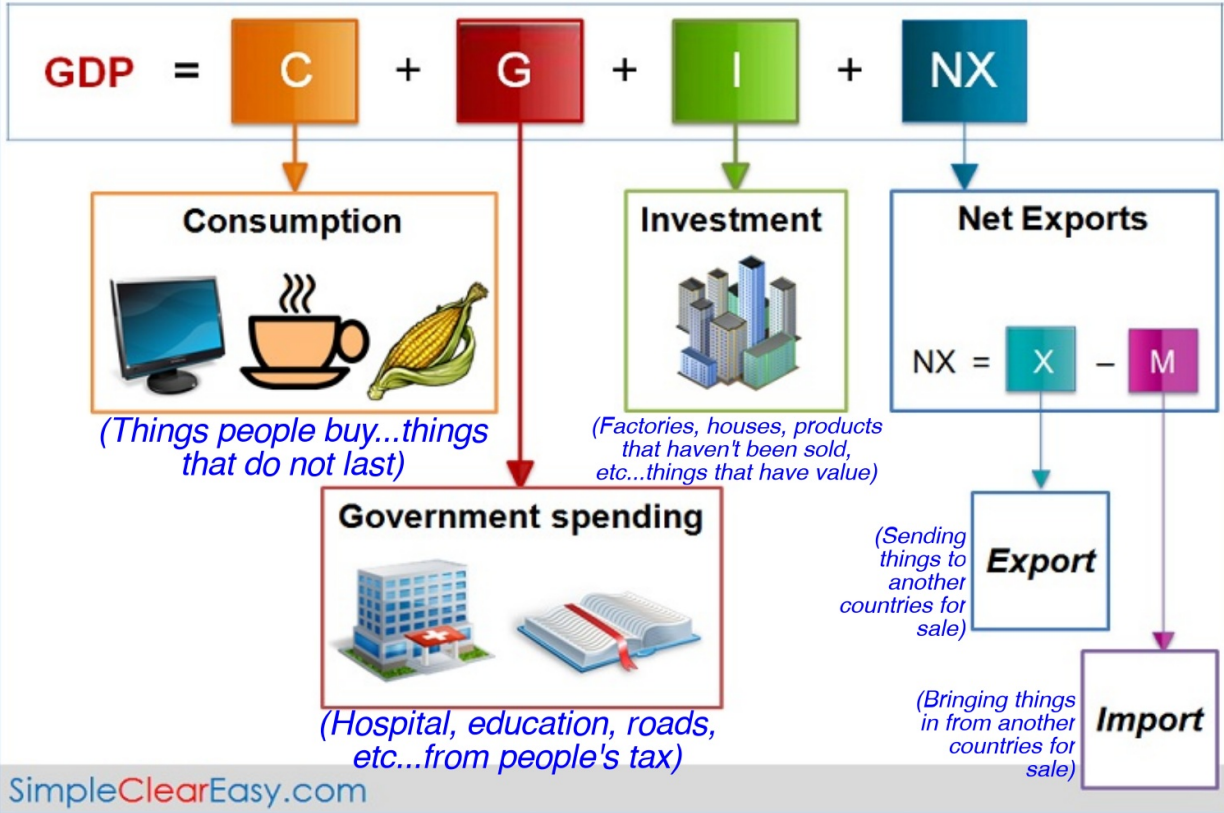
Click here.

Country Demographics:

Total Population: _____
Birth Rate: _____
Death Rate: _____
Growth Rate: _____
Life Expectancy: _____
Infant Mortality Rate: _____
Total Fertility Rate: _____
Physicians density: _____
GDP – per capita: _____

Use this to put down all the answers.

See next page...

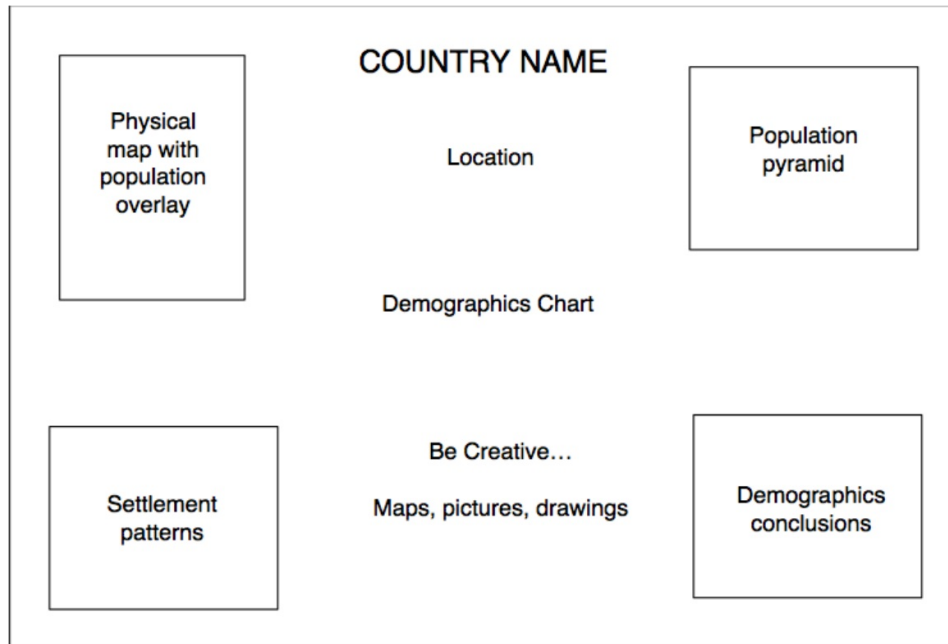


GDP divided by how many people living in the country (population) = GDP per capita

\$ _____ / _____ = _____

Use a poster to create your country profile project.

You have all information on your paper.



Developed or Developing

Develop - **ed**

Develop - **ing**



Developed Country

a country with an economic depending on manufacturing and technology rather than agriculture (farming)

Developing Country

a country that is poor and the people in that country are mostly agricultural workers and they want to become more advanced economically

Your country is _____.