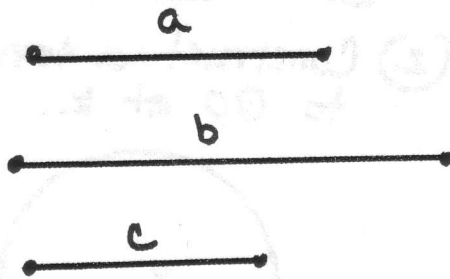
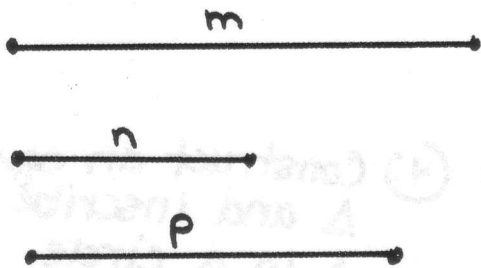



(7) Find x so that $\frac{a}{b} = \frac{c}{x}$



(8) Find y so that $\frac{m}{n} = \frac{p}{y}$



(9) Find the geometric mean between a and b from problem #7.



(10) Find the geometric mean between m and n in problem #8

