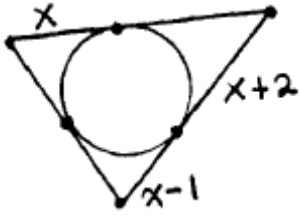
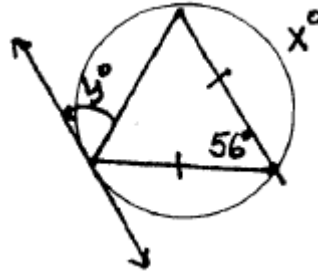




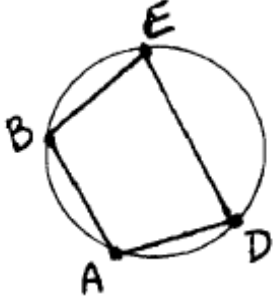
6. Find  $x$ , if perimeter of triangle = 20.



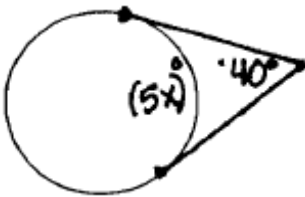
7. Find  $x$  and  $y$ .



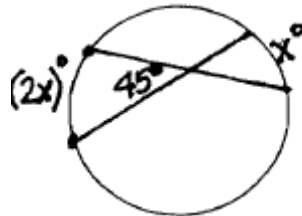
8.  $m\angle A = 5x + 3y$ ,  $m\angle B = 5x - 6$ ,  $m\angle E = 2x + y$ , and  $m\angle D = 8y + 6$ . Find  $m\angle ABE$ .



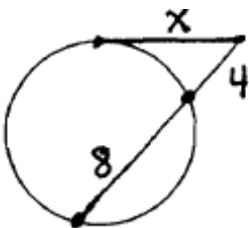
9. Find  $x$ .



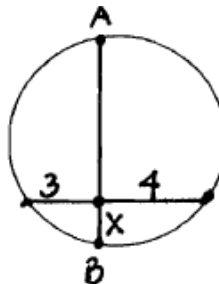
10. Find  $x$ .



11. Find  $x$ .



12. Find  $x$ , if  $AB = 8$ .



13. Find  $x$ .

