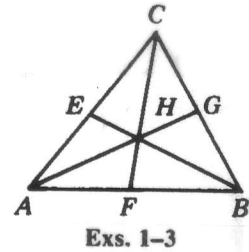


Name: _____ Date: _____ Pd: _____

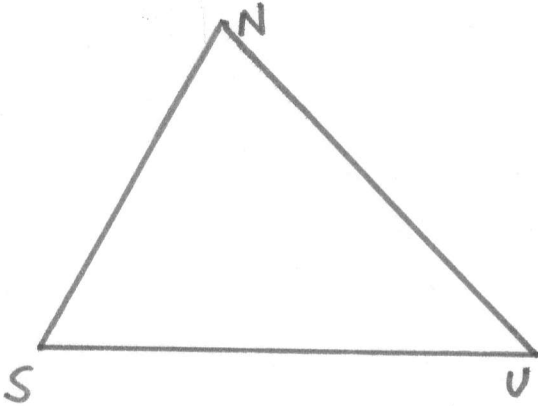
CHAPTER 10 REVIEW WS

The medians of $\triangle ABC$ are shown. Complete.

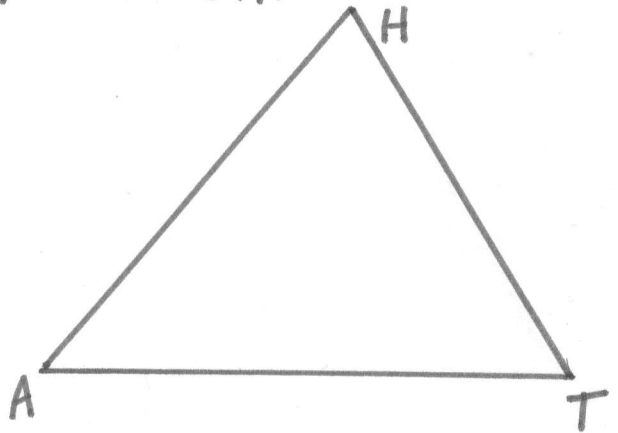
1. If $BE = 18$, then $BH =$ _____ and $HE =$ _____.
2. If $AG = 10.5$, then $AH =$ _____ and $HG =$ _____.
3. If $FH = 4$, then $CH =$ _____ and $CF =$ _____.



- ④ Construct altitude \overline{NX} of $\triangle SUN$.



- ⑤ Construct median \overline{HX} of $\triangle HAT$.



- ⑥ Inscribe a circle in the triangle.

