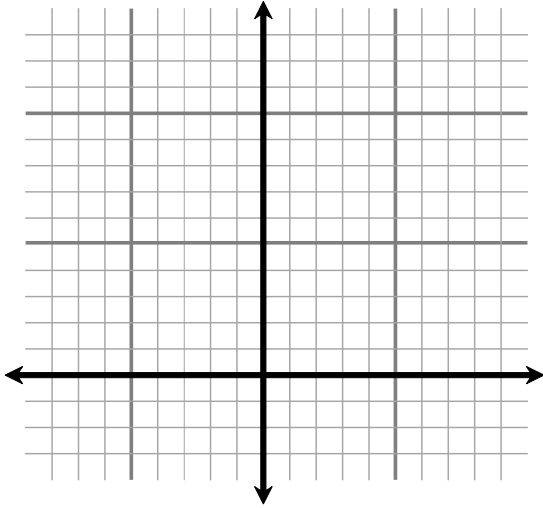
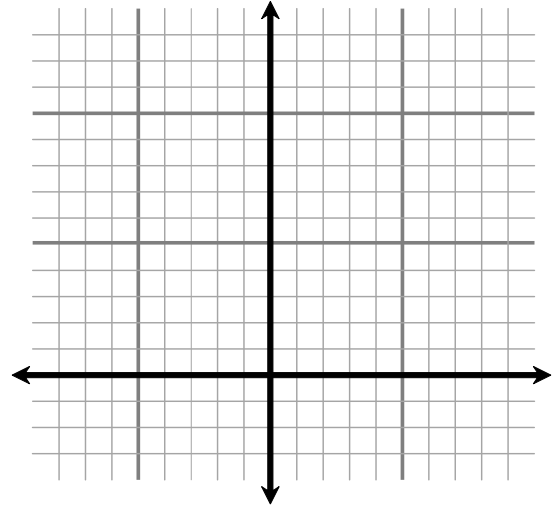


Coordinate Plane: Points P , Q , R , and S are the vertices of a quadrilateral. Give the most specific name for $PQRS$. *Justify* your answer.

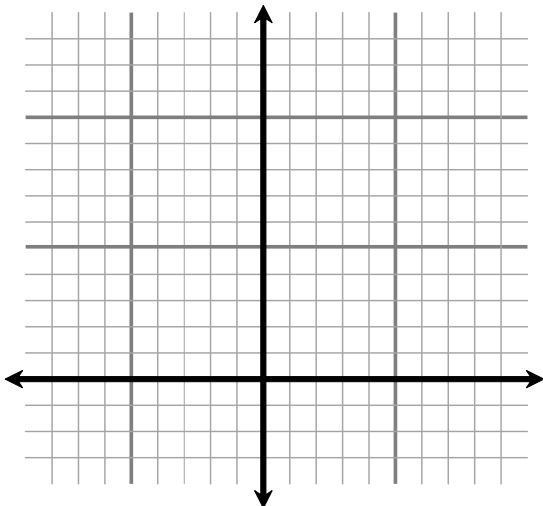
21. $P(1, 0)$, $Q(1, 2)$, $R(6, 5)$, $S(3, 0)$



22. $P(2, 1)$, $Q(6, 1)$, $R(5, 8)$, $S(3, 8)$



23. $P(2, 7)$, $Q(6, 9)$, $R(9, 3)$, $S(5, 1)$



24. $P(1, 7)$, $Q(5, 8)$, $R(6, 2)$, $S(2, 1)$

