

Name: _____

Algebra II

Date: _____ Period: _____

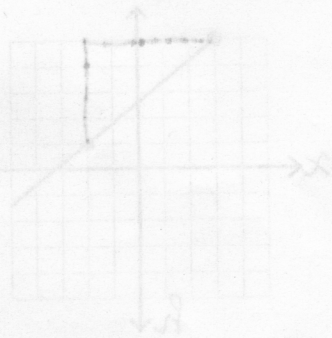
Ms. Ngo

Algebra II Extra Credit Assignment


To get the 70 points extra credit, you must do the following:

1. Do the problems as directed. See examples.
2. Do work on another sheet of paper (You can graph on the papers for "Properties of Complex Numbers # 11-22.")
3. Box your answers.
4. Write neatly.
5. Staple this paper and all work to turn in by Jan. 9th.
6. Completion with all work/steps shown = 70 points extra credit counting as HW points (25%).

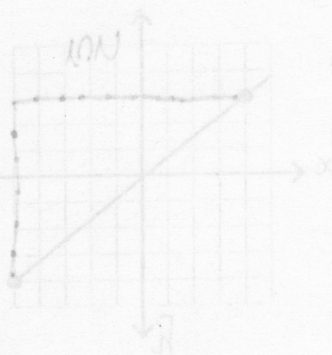
TOTAL: _____



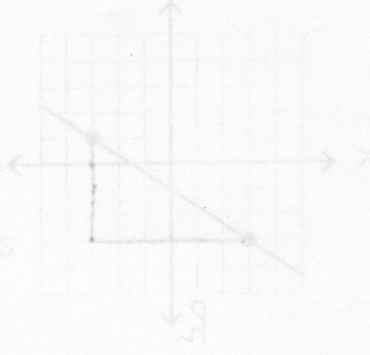
q: 2/1000 = 2/1000
c: 600 = 2
p: 6126 = 2
a: 6021116



q: 2/1000 = 2/1000
c: 600 = 2
p: 6126 = 2
a: 6021116



q: 2/1000 = 2/1000
c: 600 = 2
p: 6126 = 2
a: 6021116



q: 2/1000 = 2/1000
c: 600 = 2
p: 6126 = 2
a: 6021116