

2nd Grade Homework Packet

May 19 - May 22, 2014

Monday

Study this week's spelling list for Friday's test. Complete the "Spelling ABC" worksheet and the "Silent Consonants" worksheet. Have an adult check your homework for errors, and sign after you correct it. Read 20 minutes.

Tuesday

Complete the math pages 115 to 118. Have an adult check your homework for errors, and sign after you correct it. Read 20 minutes.

Wednesday

Tonight, you will do "family homework". Read "Seed Snack", then do the work. Have an adult check all work, then sign after you correct it. Read 20 minutes.

Thursday

This is a paper-free night! Review the spelling words to be ready for tomorrow's test. Practice, play spelling games, and take a test on this week's words. Work on time, money, and math facts. Read 20 minutes.

Reminder:

Memorial Day - No school on Monday, 5/26

Name : _____

Date : _____

Spelling Lesson - Wagon Wheels - Lesson 1

* - bonus words

Word List	Vowels	Syllables	ABC Order
1 wagon			
2 wheels			
3 letter			
4 always			
5 across			
6 prairie			
7 people			
8 move			
9 moving			
10 animals			
11 * remember			
12 * rattlesnake			
13			
14			
15			

You often see the letters **k** and **n** together at the beginning of a word. When you see them, remember that the **k** is silent. All you hear is the **n**.

In the box below, circle the words with silent **k**.

Kite	knee	king	knife	knit
know	key	knight	knot	knob

Complete each sentence below with a circled word from the box.

1. I fell and cut my _____.



2. Bob can tie a _____.

3. The _____ on this door will not turn.

4. I need a _____ to cut this cake.



5. Can you _____ a sweater?



6. Long ago, a _____ rode a horse and wore metal armor.

7. How did you _____ the answer to that riddle?

The letter **b** is silent when it follows the letter **m**.



lamb



comb

The letter **b** is also silent when it comes before the letter **t**.


In the box below, circle the words with silent **b**.

climb	crumb	club	thumb
debt	drum	doubt	plumber
numb	dent	bomb	tomb

1. My legs fell asleep and became _____.

2. When you _____ a mountain, you must be very careful.

3. I _____ that you run faster than I run.



4. When Dan hit his _____ with a hammer, he said, "Ouch!"

5. The mouse ate a _____ of bread.



6. Call the _____ to fix the pipes under the sink.

In the box below, circle the words with silent **g** or silent **w**.


gnaw	write	wrap	gnu	gate
wren	gem	wrinkle	gnat	wrist
wring	gnarl	well	west	wrench

Fractions Equal to 1

Color to show the fraction.
Write the fraction.

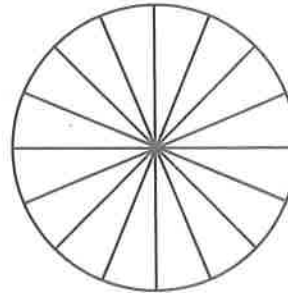
1. Nora cuts a pie into 4 parts.
Each piece is $\frac{1}{4}$.

$$\frac{\begin{array}{c} \square \\ \square \\ \square \\ \square \end{array}}{\square} = 1 \text{ whole}$$



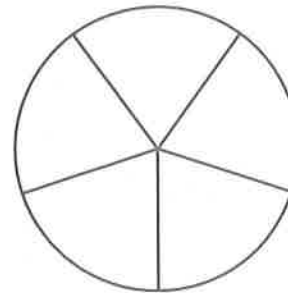
2. Rosa cuts a pizza into 16 parts.
Each piece is $\frac{1}{16}$.

$$\frac{\square}{\square} = 1 \text{ whole}$$



3. Simon cuts a pizza into 5 parts.
Each piece is $\frac{1}{5}$.

$$\frac{\square}{\square} = 1 \text{ whole}$$



Mark the correct answer.

4. Rick cuts a pizza into 7 parts.
Which fraction describes the whole pizza?

$\frac{5}{5}$

$\frac{7}{7}$

$\frac{8}{8}$

$\frac{10}{10}$

5. Eileen cuts a pizza into 8 parts.
Which fraction describes the whole pizza?

$\frac{8}{8}$

$\frac{12}{12}$

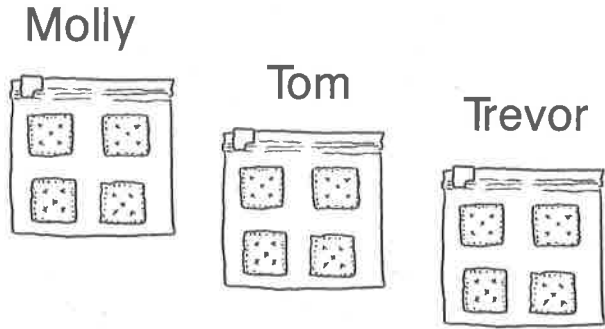
$\frac{9}{9}$

$\frac{16}{16}$

Explore Fractions

Circle the fraction.

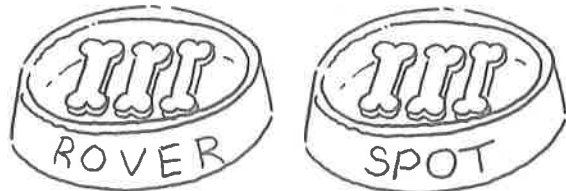
1. Mom puts 4 crackers in each bag. Molly, Tom, and Trevor each get a bag. What fraction of the crackers does Molly get?



$\frac{1}{3}$

$\frac{1}{4}$


2. Rover and Spot each get 3 dog bones. What fraction of the dog bones does Spot get?



$\frac{1}{2}$

$\frac{1}{3}$

3. There are 3 bananas in each bunch. 4 monkeys each get a bunch. What fraction of the bananas does each monkey get?



$\frac{1}{3}$

$\frac{1}{4}$

Mark the correct answer.

4. What fraction is shaded?

$\frac{1}{2}$



$\frac{1}{3}$



$\frac{1}{4}$



$\frac{1}{5}$



5. What fraction is shaded?

$\frac{1}{2}$



$\frac{1}{3}$

$\frac{1}{4}$



$\frac{1}{5}$

Name _____

Understand Plan Solve Check

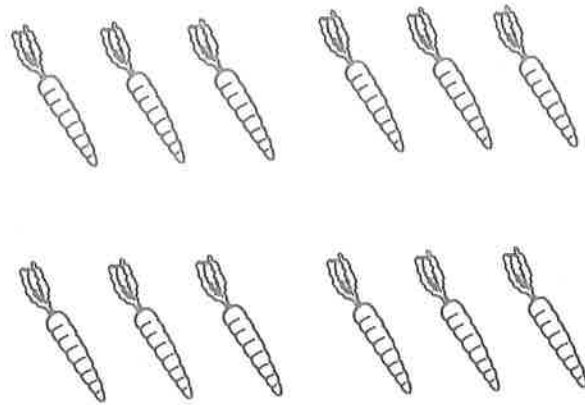
Unit Fractions

Color the parts to solve.
Circle the fraction.

1. There are 12 carrots in the garden. Sue picks 3 of them. What fraction of the carrots does Sue pick?

$\frac{1}{3}$


$\frac{1}{4}$



2. There are 8 flowers in the garden. David picks 4 of them. What fraction of the flowers does David pick?

$\frac{1}{2}$


$\frac{1}{4}$



3. There are 10 lemons in the garden. Miguel picks 2 of them. What fraction of the lemons does Miguel pick?

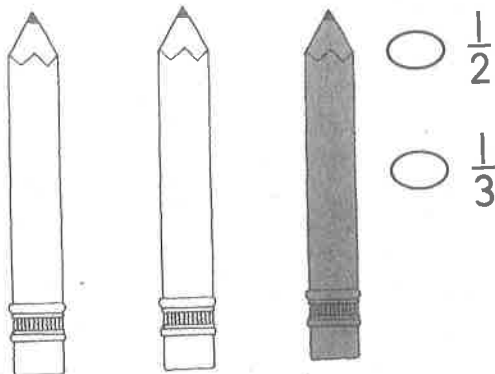
$\frac{1}{2}$

$\frac{1}{5}$




Mark the correct answer.

4. What fraction is shaded?



5. What fraction is shaded?




© Harcourt

Other Fractions

Write a fraction to solve.

1. Lisa has 3 red flowers. Jackie has 2 yellow flowers. What fraction of the flowers are yellow?



2. Cory has 4 small toy cars. Robby has 4 big toy cars. What fraction of the toy cars are small?



3. There are 7 dogs. 3 dogs do not have spots. 4 dogs have spots. What fraction of the dogs do **not** have spots?




4. There are 4 children. 1 child is wearing a shirt with stripes. What fraction of the children are not wearing shirts with stripes?




Mark the correct answer.

5. What fraction is shaded?



6. What fraction is white?



Read the selection. Then answer Numbers 11 through 16.

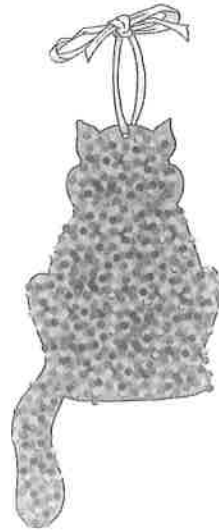
Seed Snack

The California Valley Quail is the state bird of California. It eats seeds, so it might enjoy this treat.









Follow these easy steps to make a Seed Snack.

- Step 1** Draw a shape on cardboard. Cut it out. Ask an adult to help you make a small hole in the shape.
- Step 2** Push a piece of ribbon through the hole. Tie the ends to make a loop. You will use this to hang your Seed Snack.
- Step 3** Mix a small amount of cornmeal with the peanut butter. This keeps the peanut butter from sticking to birds' throats.
- Step 4** Spread peanut butter on the cardboard shape.
- Step 5** Sprinkle the birdseed on the shape.

Hang your Seed Snack outside. See how many different kinds of birds will eat this treat.



You Will Need

- cardboard 
- scissors 
- knife 
- pencil 
- peanut butter 
- cornmeal 
- ribbon 
- birdseed 

11. When should you spread the peanut butter on the cardboard shape?
- Ⓐ after you sprinkle the birdseed on the shape
 - Ⓑ before you sprinkle the birdseed on the shape
 - Ⓒ before you cut out the shape
 - Ⓓ after you hang the bird treat outside
12. When you make a Seed Snack, what do you need to have an adult help you do?
- Ⓐ Cut out the cardboard shape.
 - Ⓑ Spread peanut butter on the shape.
 - Ⓒ Sprinkle peanut butter on the shape.
 - Ⓓ Make a hole in the shape.
13. Why do you need to mix cornmeal with the peanut butter?
- Ⓐ because it keeps the peanut butter from sticking to birds' throats
 - Ⓑ because it makes the peanut butter easier to spread
 - Ⓒ because birds like cornmeal
 - Ⓓ because cornmeal is healthy for birds
14. By looking at the drawing of the Seed Snack on page 50, you learn
- Ⓐ that you need to make a large hole in the shape.
 - Ⓑ that you need to sprinkle the seed in the middle of the shape.
 - Ⓒ that you need to spread the peanut butter to the edges of the cardboard.
 - Ⓓ how much cornmeal you need to use.
15. Which step tells you what to do with the ribbon?
- Ⓐ Step 1
 - Ⓑ Step 2
 - Ⓒ Step 3
 - Ⓓ Step 4
16. Why is it funny to see a bird treat in the shape of a cat?
- Ⓐ because cats are funny
 - Ⓑ because cats eat birds
 - Ⓒ because birds think cats are funny
 - Ⓓ because cats have a funny shape