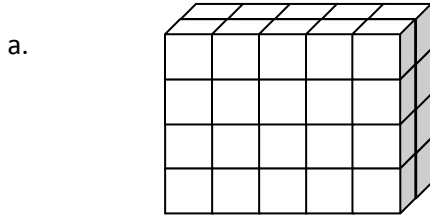


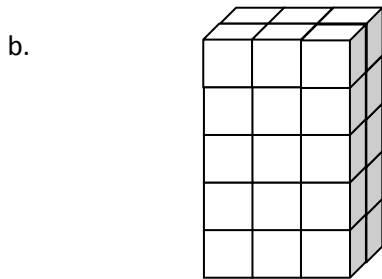
Name _____

Date _____

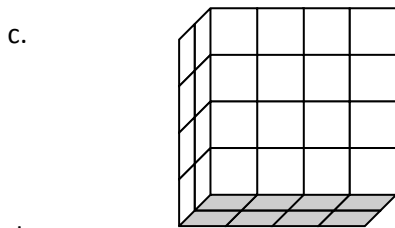
1. Each rectangular prism is built from centimeter cubes. State the dimensions and find the volume.



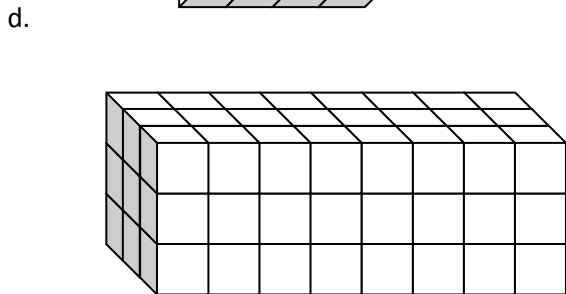
Length: _____ cm
 Width: _____ cm
 Height: _____ cm
 Volume: _____ cm³



Length: _____ cm
 Width: _____ cm
 Height: _____ cm
 Volume: _____ cm³



Length: _____ cm
 Width: _____ cm
 Height: _____ cm
 Volume: _____ cm³



Length: _____ cm
 Width: _____ cm
 Height: _____ cm
 Volume: _____ cm³

2. Write a multiplication sentence that you could use to calculate the volume for each rectangular prism in Problem 1. Include the units in your sentences.

a. _____

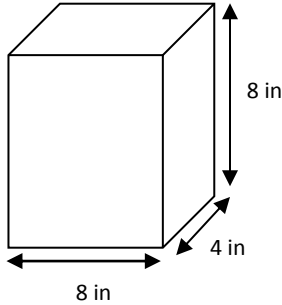
b. _____

c. _____

d. _____

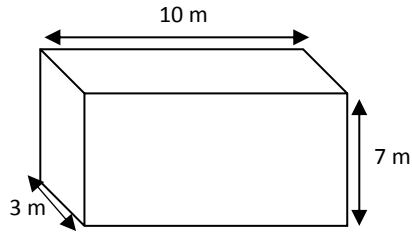
3. Calculate the volume of each rectangular prism. Include the units in your number sentences.

a.



Volume: _____

b.



Volume: _____

4. Mrs. Johnson is constructing a box in the shape of a rectangular prism to store clothes for the summer. It has a length of 28 inches, a width of 24 inches, and a height of 30 inches. What is the volume of the box?

5. Calculate the volume of each rectangular prism using the information that is provided.

a. Face area: 56 square meters, height: 4 meters.

b. Face area: 169 square inches, height: 14 inches.