

CONSTRUCTIONS 1 - 9 REVIEW

NAME: _____

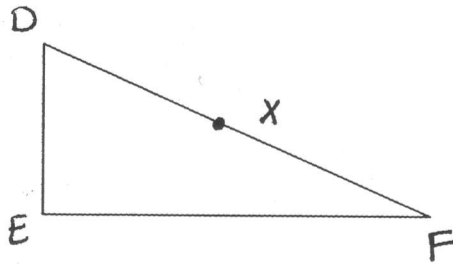
DATE: _____

PERIOD: _____

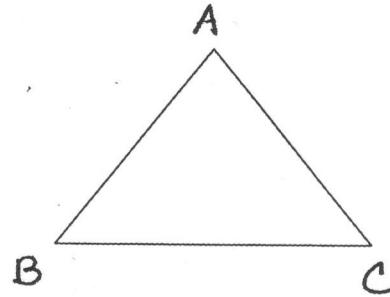
ASSIGNMENT # _____

Construct the following:

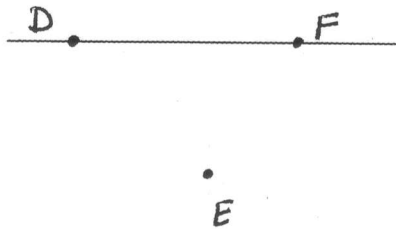
1.) the perpendicular to DF at X



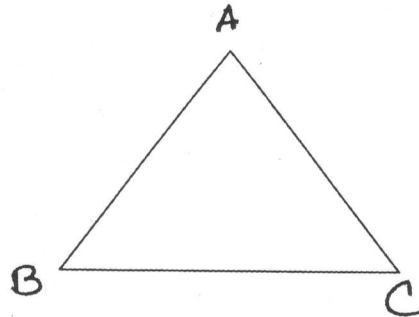
2.) The perpendicular to BC from A



3.) the parallel to DF through E



4.) the perpendicular bisector of AC



5.) JK having length equal to $\frac{1}{4}$ PQ.



6.) an angle with 30°

7.) an angle with 120°

8.) $\frac{1}{2} \angle ABC$

