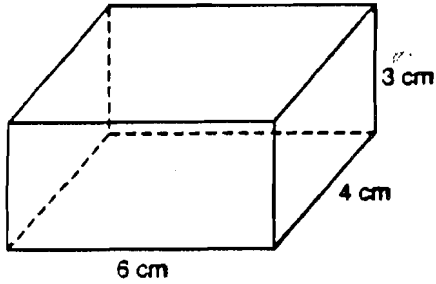


*SHOW WORK. Give exact answers in simplest form. (No decimals.)*

Find lateral area, total area, and volume.

1.

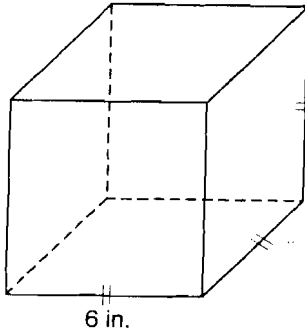


L.A. =

T.A. =

V =

2.

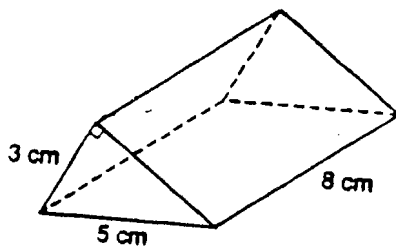


L.A. =

T.A. =

V =

3.

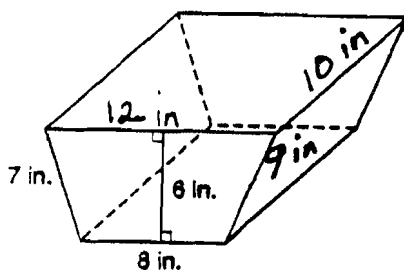


L.A. =

T.A. =

V =

4.



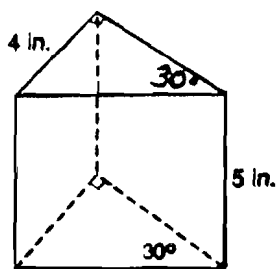
L.A. =

T.A. =

V =

Find lateral area, total area, and volume.

5.



L.A. =

T.A. =

V =

6. Find the volume of the solid below.

