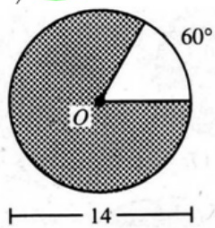


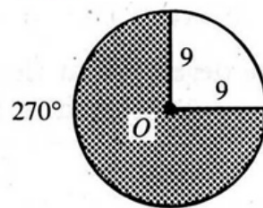
WARMUP

Find the area of each shaded region. Point O marks the center of a circle. Leave in terms of π .

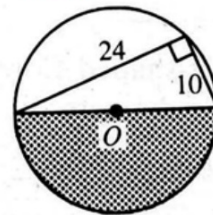
1) ●



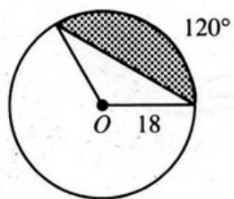
2) ●



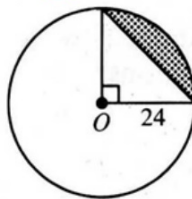
3) ●



4) ●



5) ●



6) ●

