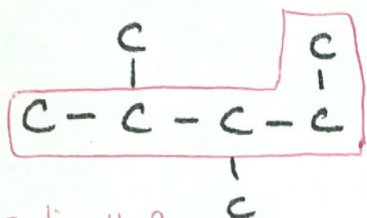



**22 • Organic Chemistry****HYDROCARBON PRACTICE #1**

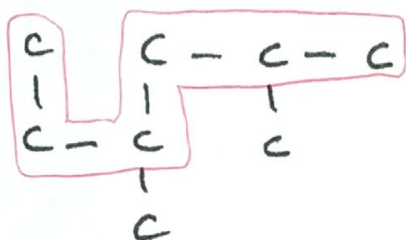
Draw a box around the parent chain in each hydrocarbon and name the molecule.



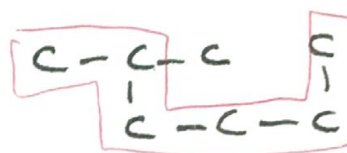
2,3-dimethylpentane



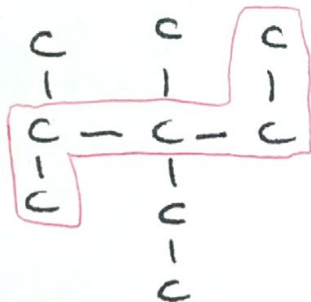
2-methylpentane



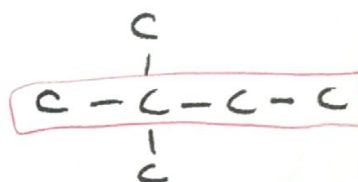
2,4-dimethylhexane



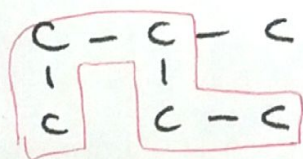
2-methylhexane



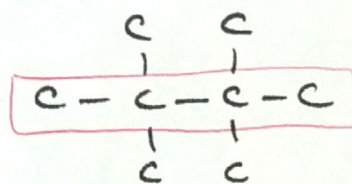
3-ethyl-2,3-dimethylpentane



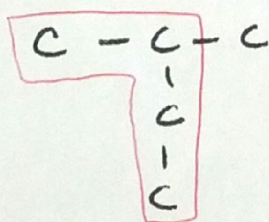
2,2-dimethylbutane



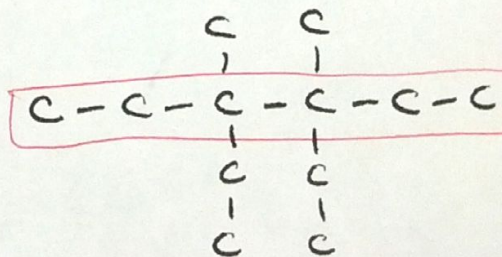
3-methylpentane



2,2,3,3-tetramethylbutane



2-methylbutane



3,4-diethyl-3,4-dimethylhexane

